

Name

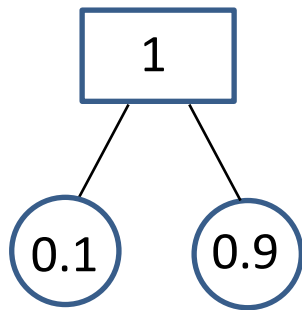
Date



DECIMAL NUMBER BONDS TO 1 WITH 1DP SHEET 1

0	0.1	0.2	0.3	0.4	0.5	0.6	0.7	0.8	0.9	1
---	-----	-----	-----	-----	-----	-----	-----	-----	-----	---

Fill in the missing numbers in the diagrams to make 1 and complete the calculations. The first one is done for you.

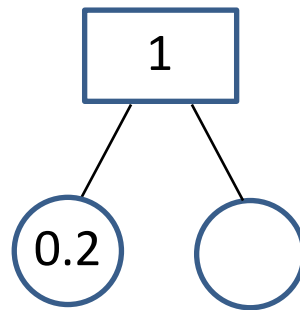


$$0.1 + 0.9 = 1$$

$$0.9 + 0.1 = 1$$

$$1 - 0.1 = 0.9$$

$$1 - 0.9 = 0.1$$

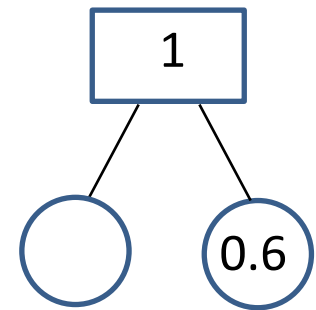


$$\underline{\quad} + \underline{\quad} = 1$$

$$\underline{\quad} + \underline{\quad} = 1$$

$$1 - \underline{\quad} = \underline{\quad}$$

$$1 - \underline{\quad} = \underline{\quad}$$

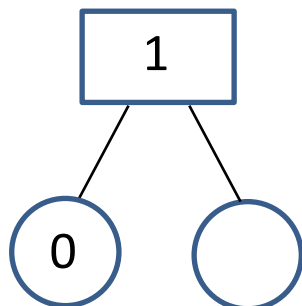


$$\underline{\quad} + \underline{\quad} = 1$$

$$\underline{\quad} + \underline{\quad} = 1$$

$$1 - \underline{\quad} = \underline{\quad}$$

$$1 - \underline{\quad} = \underline{\quad}$$

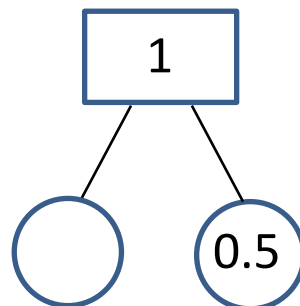


$$\underline{\quad} + \underline{\quad} = 1$$

$$\underline{\quad} + \underline{\quad} = 1$$

$$1 - \underline{\quad} = \underline{\quad}$$

$$1 - \underline{\quad} = \underline{\quad}$$

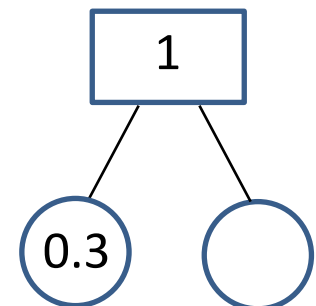


$$\underline{\quad} + \underline{\quad} = 1$$

$$\underline{\quad} + \underline{\quad} = 1$$

$$1 - \underline{\quad} = \underline{\quad}$$

$$1 - \underline{\quad} = \underline{\quad}$$



$$\underline{\quad} + \underline{\quad} = 1$$

$$\underline{\quad} + \underline{\quad} = 1$$

$$1 - \underline{\quad} = \underline{\quad}$$

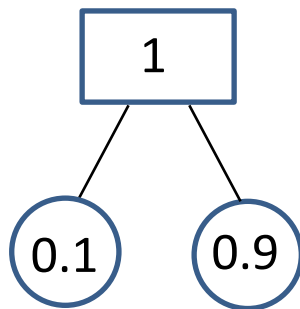
$$1 - \underline{\quad} = \underline{\quad}$$



DECIMAL NUMBER BONDS TO 1 WITH 1DP SHEET 1 ANSWERS

0	0.1	0.2	0.3	0.4	0.5	0.6	0.7	0.8	0.9	1
---	-----	-----	-----	-----	-----	-----	-----	-----	-----	---

Fill in the missing numbers in the diagrams to make 1 and complete the calculations. The first one is done for you.

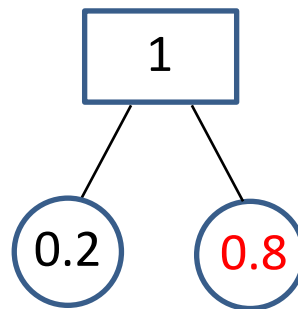


$$0.1 + 0.9 = 1$$

$$0.9 + 0.1 = 1$$

$$1 - 0.1 = 0.9$$

$$1 - 0.9 = 0.1$$

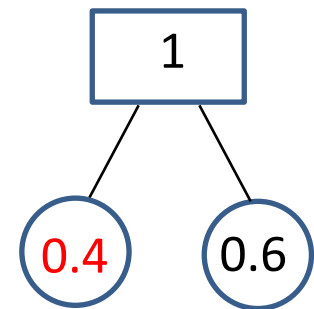


$$\underline{0.2} + \underline{0.8} = 1$$

$$\underline{0.8} + \underline{0.2} = 1$$

$$1 - \underline{0.2} = \underline{0.8}$$

$$1 - \underline{0.8} = \underline{0.2}$$

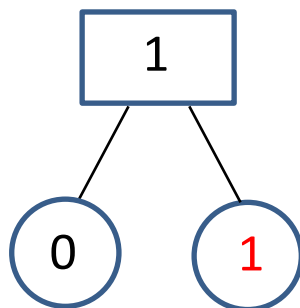


$$\underline{0.4} + \underline{0.6} = 1$$

$$\underline{0.6} + \underline{0.4} = 1$$

$$1 - \underline{0.4} = \underline{0.6}$$

$$1 - \underline{0.6} = \underline{0.4}$$

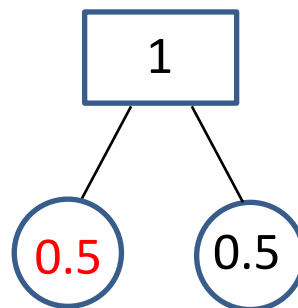


$$\underline{0} + \underline{1} = 1$$

$$\underline{1} + \underline{0} = 1$$

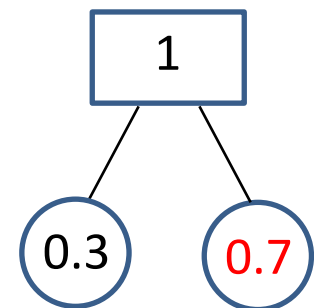
$$1 - \underline{0} = \underline{1}$$

$$1 - \underline{1} = \underline{0}$$



$$\underline{0.5} + \underline{0.5} = 1$$

$$1 - \underline{0.5} = \underline{0.5}$$



$$\underline{0.3} + \underline{0.7} = 1$$

$$\underline{0.7} + \underline{0.3} = 1$$

$$1 - \underline{0.3} = \underline{0.7}$$

$$1 - \underline{0.7} = \underline{0.3}$$