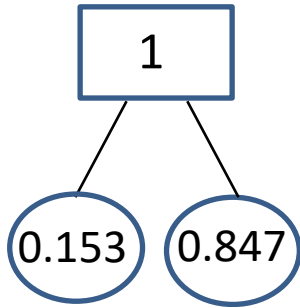




# DECIMAL NUMBER BONDS TO 1 WITH 3DP SHEET 1

Fill in the missing numbers in the diagrams to make 1 and complete the calculations. The first one is done for you.

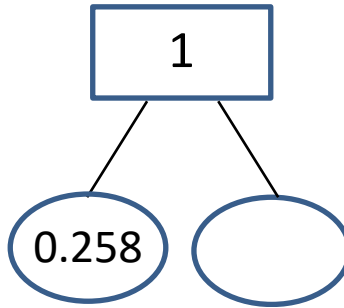


$$0.153 + 0.847 = 1$$

$$0.847 + 0.153 = 1$$

$$1 - 0.153 = 0.847$$

$$1 - 0.847 = 0.153$$

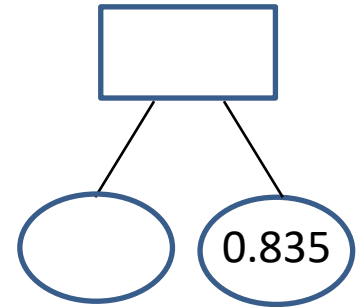


$$\underline{\quad\quad} + \underline{\quad\quad} = 1$$

$$\underline{\quad\quad} + \underline{\quad\quad} = 1$$

$$1 - \underline{\quad\quad} = \underline{\quad\quad}$$

$$1 - \underline{\quad\quad} = \underline{\quad\quad}$$

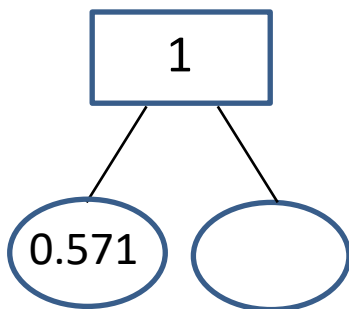


$$\underline{\quad\quad} + \underline{\quad\quad} = 1$$

$$\underline{\quad\quad} + \underline{\quad\quad} = 1$$

$$1 - \underline{\quad\quad} = \underline{\quad\quad}$$

$$1 - \underline{\quad\quad} = \underline{\quad\quad}$$

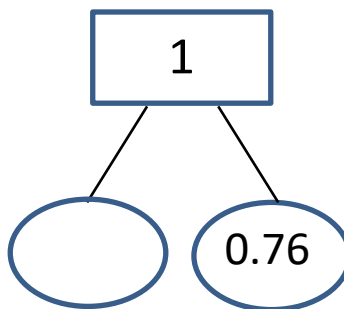


$$\underline{\quad\quad} + \underline{\quad\quad} = 1$$

$$\underline{\quad\quad} + \underline{\quad\quad} = 1$$

$$1 - \underline{\quad\quad} = \underline{\quad\quad}$$

$$1 - \underline{\quad\quad} = \underline{\quad\quad}$$

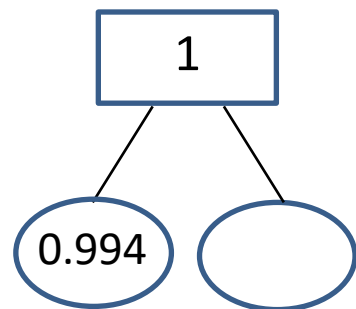


$$\underline{\quad\quad} + \underline{\quad\quad} = 1$$

$$\underline{\quad\quad} + \underline{\quad\quad} = 1$$

$$1 - \underline{\quad\quad} = \underline{\quad\quad}$$

$$1 - \underline{\quad\quad} = \underline{\quad\quad}$$



$$\underline{\quad\quad} + \underline{\quad\quad} = 1$$

$$\underline{\quad\quad} + \underline{\quad\quad} = 1$$

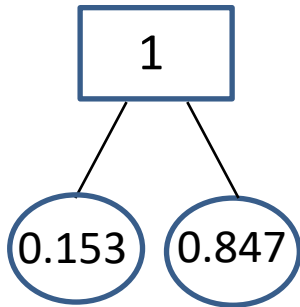
$$1 - \underline{\quad\quad} = \underline{\quad\quad}$$

$$1 - \underline{\quad\quad} = \underline{\quad\quad}$$



# DECIMAL NUMBER BONDS TO 1 WITH 3DP SHEET 1 ANSWERS

Fill in the missing numbers in the diagrams to make 1 and complete the calculations. The first one is done for you.

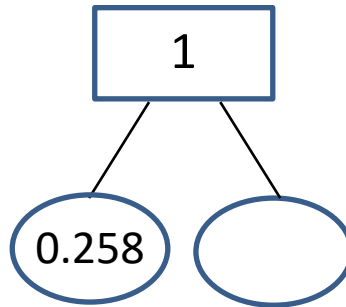


$$0.153 + 0.847 = 1$$

$$0.847 + 0.153 = 1$$

$$1 - 0.153 = 0.847$$

$$1 - 0.847 = 0.153$$

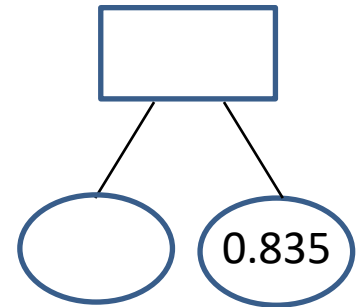


$$\underline{0.258} + \underline{0.742} = 1$$

$$\underline{0.742} + \underline{0.258} = 1$$

$$1 - \underline{0.258} = \underline{0.742}$$

$$1 - \underline{0.742} = \underline{0.258}$$

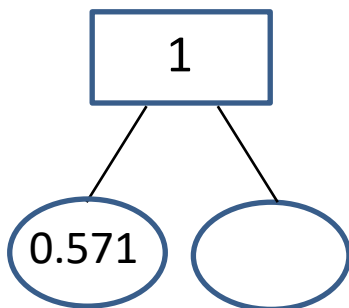


$$\underline{0.165} + \underline{0.835} = 1$$

$$\underline{0.835} + \underline{0.165} = 1$$

$$1 - \underline{0.165} = \underline{0.835}$$

$$1 - \underline{0.835} = \underline{0.165}$$

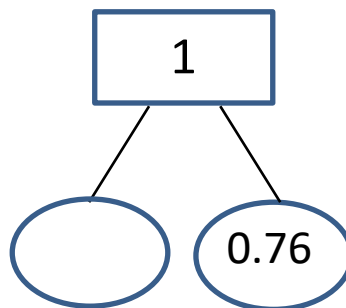


$$\underline{0.571} + \underline{0.429} = 1$$

$$\underline{0.429} + \underline{0.571} = 1$$

$$1 - \underline{0.571} = \underline{0.429}$$

$$1 - \underline{0.429} = \underline{0.571}$$

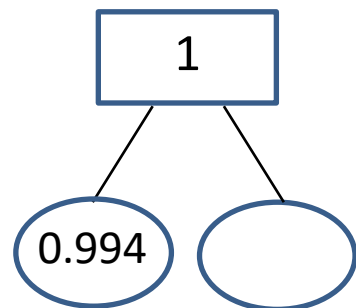


$$\underline{0.24} + \underline{0.76} = 1$$

$$\underline{0.76} + \underline{0.24} = 1$$

$$1 - \underline{0.24} = \underline{0.76}$$

$$1 - \underline{0.76} = \underline{0.24}$$



$$\underline{0.994} + \underline{0.006} = 1$$

$$\underline{0.006} + \underline{0.994} = 1$$

$$1 - \underline{0.994} = \underline{0.006}$$

$$1 - \underline{0.006} = \underline{0.994}$$