

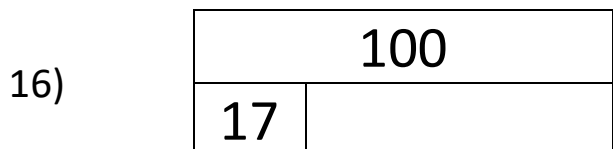

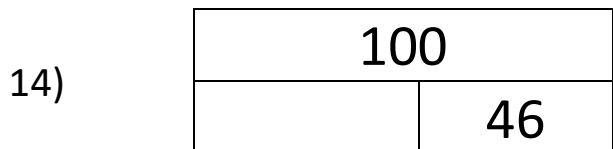
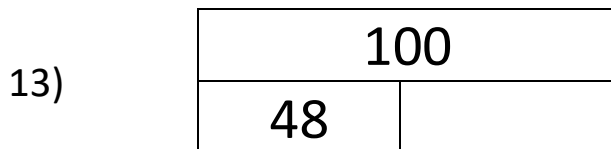
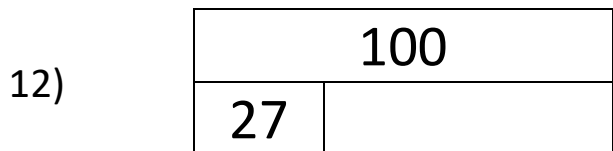
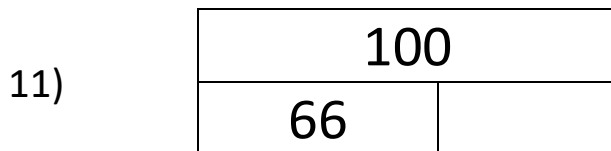
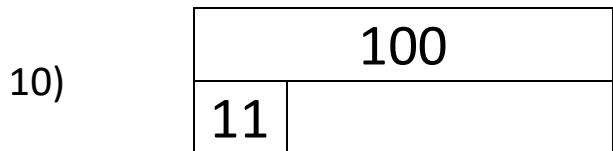

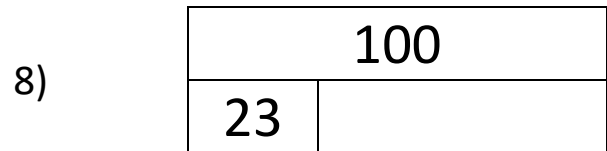
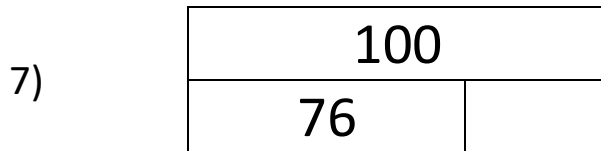
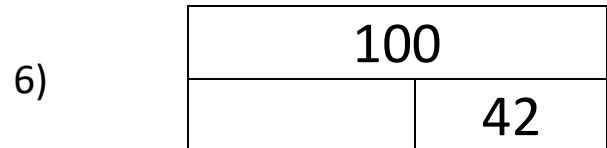
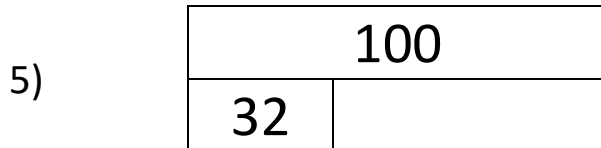
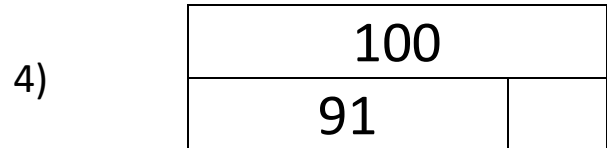

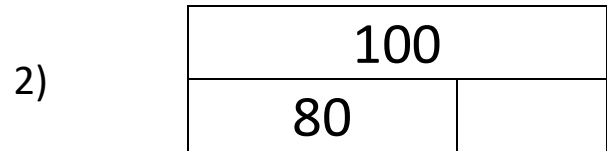
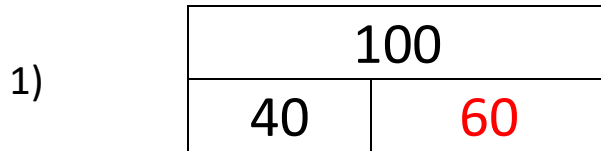
Name

Date



NUMBER BONDS TO 100 SHEET 1

Fill in the missing number bonds in these bar models so that the total is 100.



Name

Date



NUMBER BONDS TO 100 SHEET 1 ANSWERS

1)

100	
40	<u>60</u>

2)

100	
80	<u>20</u>

3)

100	
<u>45</u>	55

4)

100	
91	<u>9</u>

5)

100	
32	<u>68</u>

6)

100	
<u>58</u>	42

7)

100	
76	<u>24</u>

8)

100	
23	<u>77</u>

9)

100	
<u>38</u>	62

10)

100	
11	<u>89</u>

11)

100	
66	<u>34</u>

12)

100	
27	<u>73</u>

13)

100	
48	<u>52</u>

14)

100	
<u>54</u>	46

15)

100	
<u>88</u>	12

16)

100	
17	<u>83</u>