

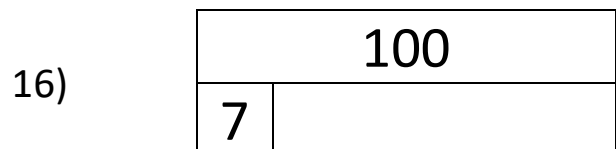

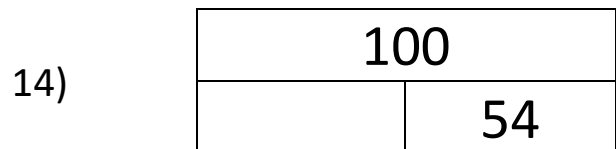
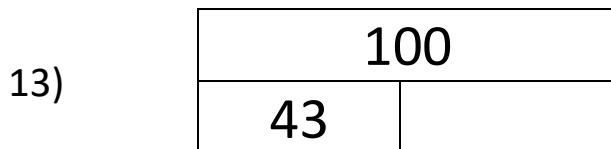

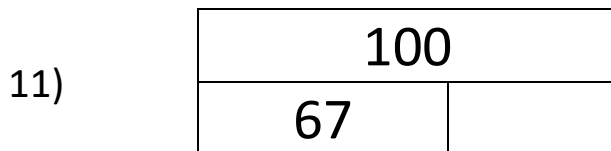
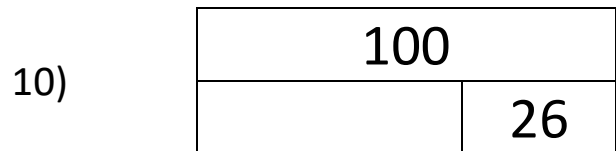
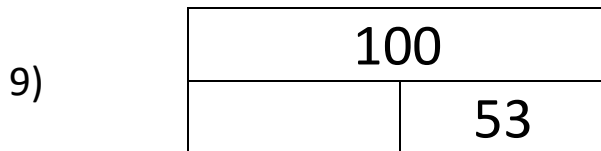
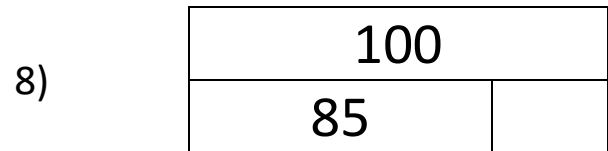
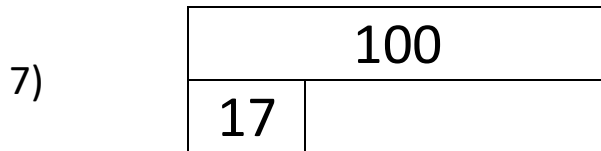
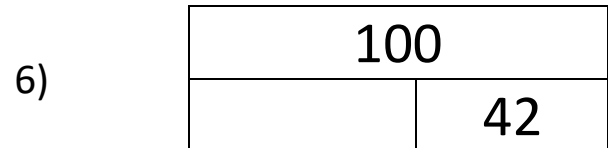
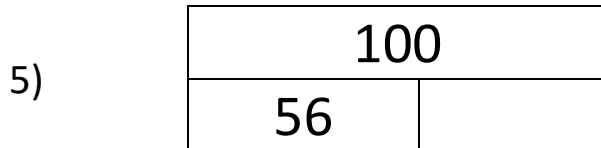
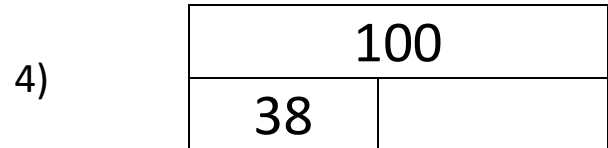

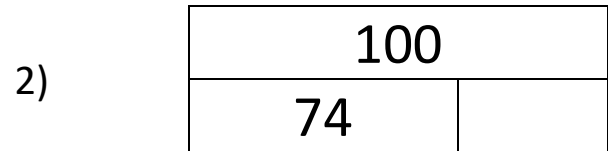
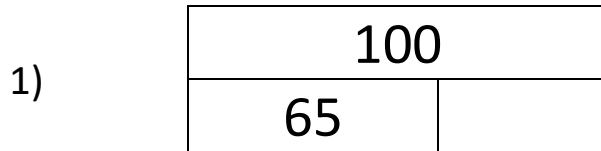
Name

Date



## NUMBER BONDS TO 100 SHEET 2

Fill in the missing number bonds in these bar models so that the total is 100.



Name

Date



# NUMBER BONDS TO 100 SHEET 2 ANSWERS

1)

100	
65	<u>35</u>

2)

100	
74	<u>26</u>

3)

100	
<u>79</u>	21

4)

100	
38	<u>62</u>

5)

100	
56	<u>44</u>

6)

100	
<u>58</u>	42

7)

100	
17	<u>83</u>

8)

100	
85	<u>15</u>

9)

100	
<u>47</u>	53

10)

100	
<u>74</u>	26

11)

100	
67	<u>33</u>

12)

100	
<u>21</u>	79

13)

100	
43	<u>57</u>

14)

100	
<u>46</u>	54

15)

100	
<u>82</u>	18

16)

100	
7	<u>93</u>

