




## NUMBER BONDS TO 100 SHEET 3

Fill in the missing numbers in these bar models and then complete the facts.

1)



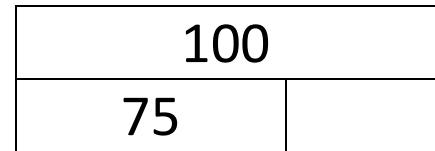
$$35 + 65 = 100$$

$$65 + 35 = 100$$

$$100 - 35 = 65$$

$$100 - 65 = 35$$

2)




$$75 + \underline{\quad} = 100$$

$$\underline{\quad} + 75 = 100$$

$$100 - 75 = \underline{\quad}$$

$$100 - \underline{\quad} = 75$$

3)



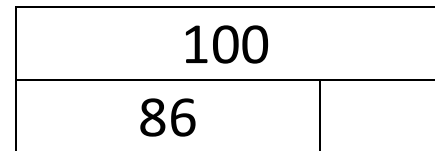
$$\underline{\quad} + 52 = 100$$

$$52 + \underline{\quad} = 100$$

$$100 - 52 = \underline{\quad}$$

$$100 - \underline{\quad} = 52$$

4)




$$86 + \underline{\quad} = 100$$

$$\underline{\quad} + 86 = 100$$

$$100 - 86 = \underline{\quad}$$

$$100 - \underline{\quad} = 86$$

5)



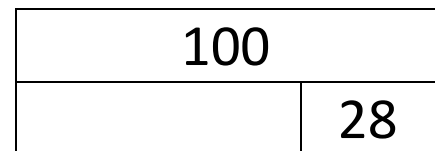
$$41 + \underline{\quad} = 100$$

$$\underline{\quad} + 41 = 100$$

$$100 - 41 = \underline{\quad}$$

$$100 - \underline{\quad} = 41$$

6)



$$\underline{\quad} + 28 = 100$$

$$28 + \underline{\quad} = 100$$

$$100 - 28 = \underline{\quad}$$

$$100 - \underline{\quad} = 28$$





# NUMBER BONDS TO 100 SHEET 3 ANSWERS

1)

100	
35	65

$$35 + 65 = 100$$

$$65 + 35 = 100$$

$$100 - 35 = 65$$

$$100 - 65 = 35$$

2)

100	
75	<u>25</u>

$$75 + \underline{25} = 100$$

$$\underline{25} + 75 = 100$$

$$100 - 75 = \underline{25}$$

$$100 - \underline{25} = 75$$

3)

100	
<u>48</u>	52

$$\underline{48} + 52 = 100$$

$$52 + \underline{48} = 100$$

$$100 - 52 = \underline{48}$$

$$100 - \underline{48} = 52$$

4)

100	
86	<u>14</u>

$$86 + \underline{14} = 100$$

$$\underline{14} + 86 = 100$$

$$100 - 86 = \underline{14}$$

$$100 - \underline{14} = 86$$

5)

100	
41	<u>59</u>

$$41 + \underline{59} = 100$$

$$\underline{59} + 41 = 100$$

$$100 - 41 = \underline{59}$$

$$100 - \underline{59} = 41$$

6)

100	
<u>72</u>	28

$$\underline{72} + 28 = 100$$

$$28 + \underline{72} = 100$$

$$100 - 28 = \underline{72}$$

$$100 - \underline{72} = 28$$

