

Name _____

Date _____



NUMBER BONDS TO 100 SHEET 5

Fill in the missing numbers to make 100.

- 1) $20 + \underline{\quad} = 100$ 2) $31 + \underline{\quad} = 100$ 3) $28 + \underline{\quad} = 100$
 4) $\underline{\quad} + 15 = 100$ 5) $\underline{\quad} + 12 = 100$ 6) $\underline{\quad} + 16 = 100$
 7) $17 + \underline{\quad} = 100$ 8) $\underline{\quad} + 36 = 100$ 9) $41 + \underline{\quad} = 100$
 10) $\underline{\quad} + 4 = 100$ 11) $34 + \underline{\quad} = 100$ 12) $\underline{\quad} + 23 = 100$

Join the bonds: join up the number bonds that add up to make 100.


35	53
21	79
47	26
28	65
74	72

36	81
19	38
87	13
62	46
54	64

Circle the bonds: circle all the pairs of numbers that total 100.

32	67	29	45	88	12
68	71	25	46	55	94
7	75	23	54	67	6
14	93	77	33	29	78
98	2	54	41	63	22
31	46	17	83	59	28

See if you can
find at least 10
pairs!



Name

Date

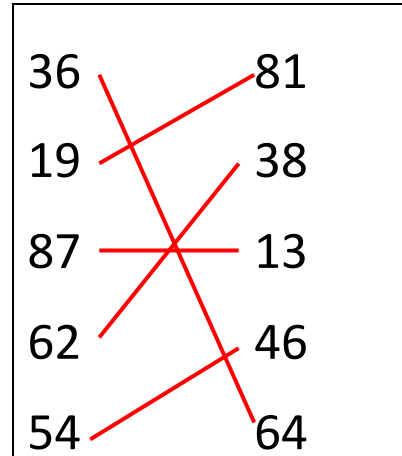
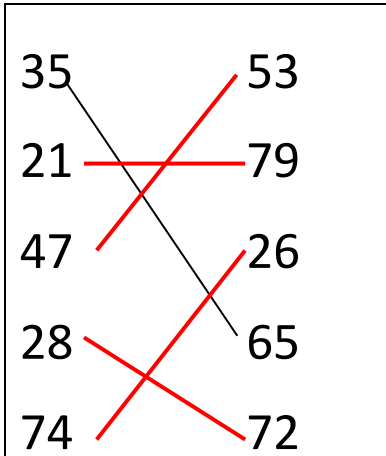


NUMBER BONDS TO 100 SHEET 5 ANSWERS

Fill in the missing numbers to make 100.

- 1) $20 + \underline{80} = 100$ 2) $31 + \underline{69} = 100$ 3) $28 + \underline{72} = 100$
 4) $\underline{85} + 15 = 100$ 5) $\underline{88} + 12 = 100$ 6) $\underline{84} + 16 = 100$
 7) $17 + \underline{83} = 100$ 8) $\underline{64} + 36 = 100$ 9) $41 + \underline{59} = 100$
 10) $\underline{96} + 4 = 100$ 11) $34 + \underline{66} = 100$ 12) $\underline{77} + 23 = 100$

Join the bonds: join up the number bonds that add up to make 100.



Circle the bonds: circle all the pairs of numbers that total 100.

32	67	29	45	88	12
68	71	25	46	55	94
7	75	23	54	67	6
14	93	77	33	29	78
98	2	54	41	63	22
31	46	17	83	59	28

Red circles are drawn around the following pairs of numbers in each row: (32, 68), (67, 71), (29, 25), (45, 46), (88, 55), (12, 94), (7, 23), (75, 25), (54, 67), (6, 6), (14, 93), (93, 77), (33, 29), (78, 29), (98, 2), (2, 54), (41, 63), (22, 63), (31, 46), (46, 17), (83, 59), (59, 28).

See if you can find at least 10 pairs!

