

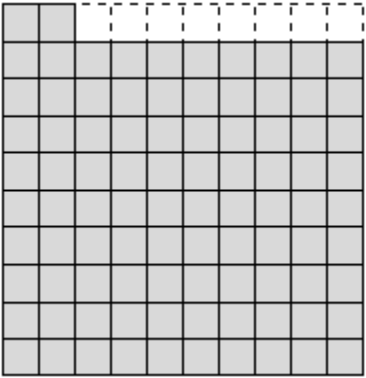
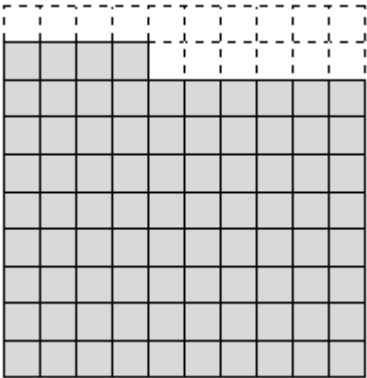
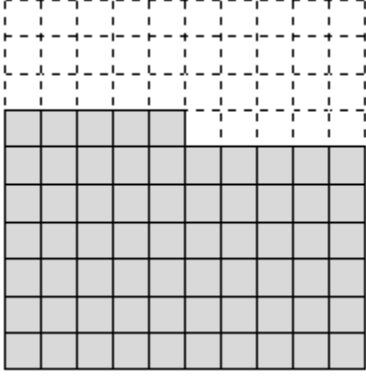
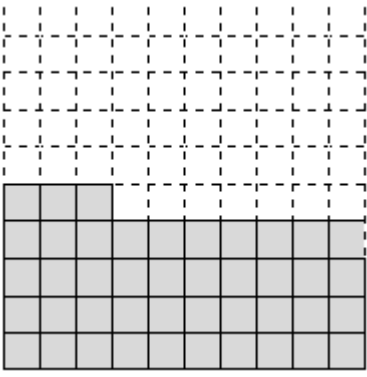
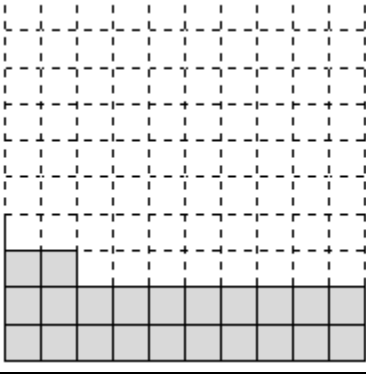
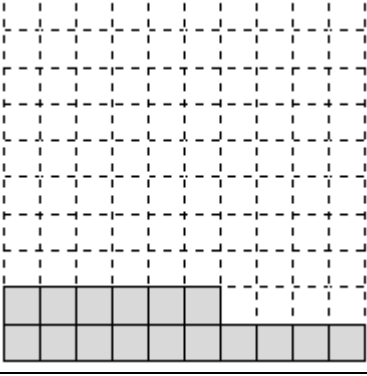
Name _____

Date _____



NUMBER BONDS TO 100 WITH BLOCKS 1

Work out the missing number of place value blocks to make 100.

1) 	2) 
$92 + \underline{\quad\quad} = 100$	$84 + \underline{\quad\quad} = 100$
3) 	4) 
$65 + \underline{\quad\quad} = 100$	$43 + \underline{\quad\quad} = 100$
5) 	6) 
$22 + \underline{\quad\quad} = 100$	$16 + \underline{\quad\quad} = 100$

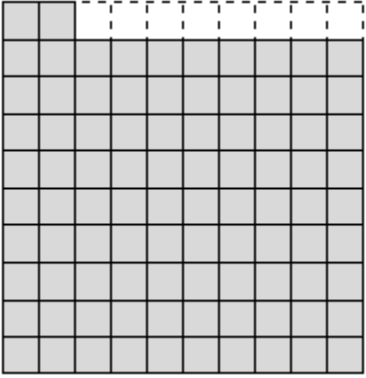
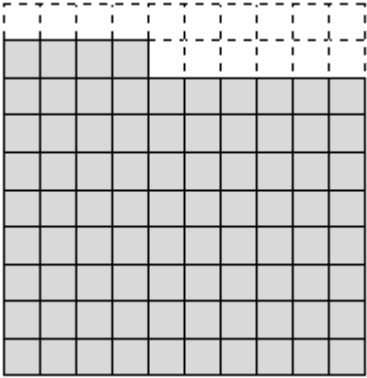
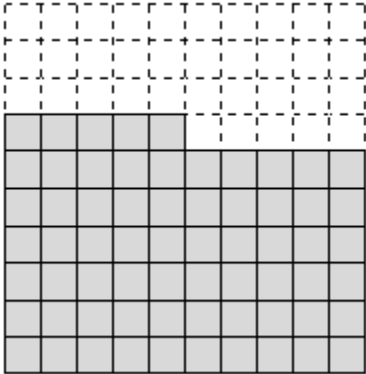
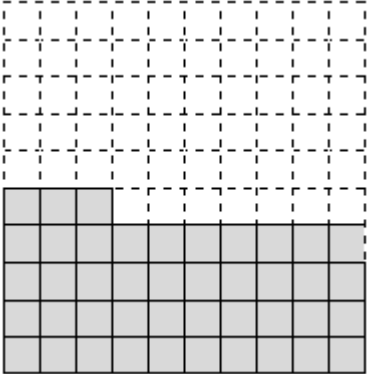
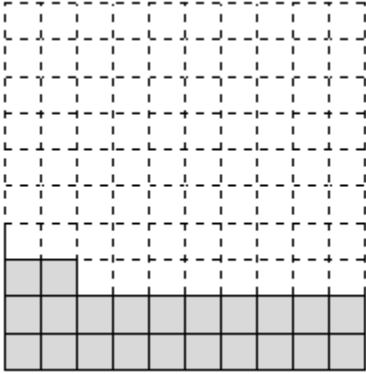
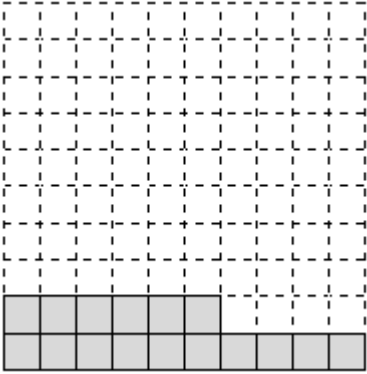
Name

Date



NUMBER BONDS TO 100 WITH BLOCKS 1 ANSWERS

Work out the missing number of place value blocks to make 100.

1) 	2) 
$92 + \underline{8} = 100$	$84 + \underline{16} = 100$
3) 	4) 
$65 + \underline{35} = 100$	$43 + \underline{57} = 100$
5) 	6) 
$22 + \underline{78} = 100$	$16 + \underline{84} = 100$

