




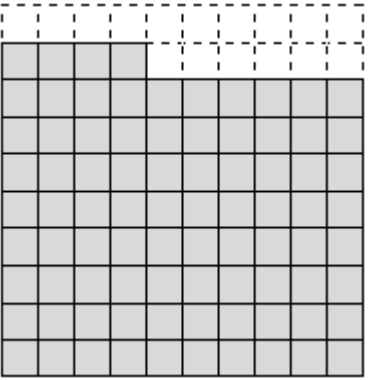


Name \_\_\_\_\_

Date \_\_\_\_\_



## NUMBER BONDS TO 100 WITH BLOCKS 2

Work out the missing number of place value blocks to make 100.

1) 	2) 
$76 + \underline{\quad\quad} = 100$	$\underline{\quad\quad} + \underline{\quad\quad} = 100$
3) 	4) 
$\underline{\quad\quad} + \underline{\quad\quad} = 100$	$\underline{\quad\quad} + \underline{\quad\quad} = 100$
5) 	6) 
$\underline{\quad\quad} + \underline{\quad\quad} = 100$	$\underline{\quad\quad} + \underline{\quad\quad} = 100$

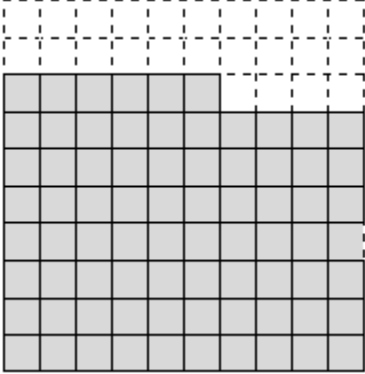
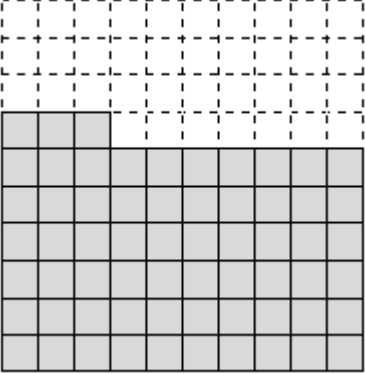

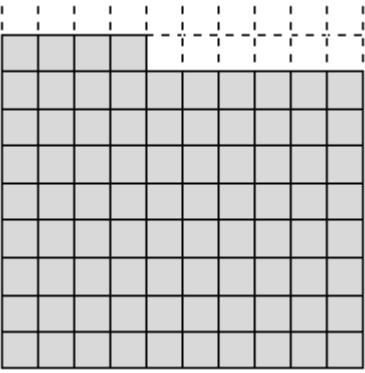
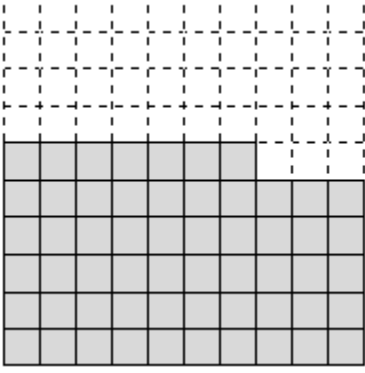
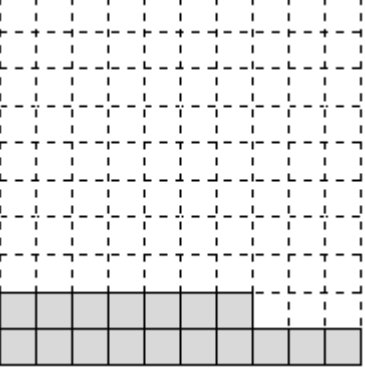
Name

Date



# NUMBER BONDS TO 100 WITH BLOCKS 2 ANSWERS

Work out the missing number of place value blocks to make 100.

<p>1)</p> 	<p>2)</p> 
$76 + \underline{24} = 100$	$\underline{63} + \underline{37} = 100$
<p>3)</p> 	<p>4)</p> 
$\underline{46} + \underline{54} = 100$	$\underline{84} + \underline{16} = 100$
<p>5)</p> 	<p>6)</p> 
$\underline{57} + \underline{43} = 100$	$\underline{17} + \underline{83} = 100$

