

Name _____

Date _____



NUMBER BONDS TO 50 SHEET 2

Fill in the missing numbers to make 50.

- 1) $36 + \underline{\quad} = 50$ 2) $\underline{\quad} + 41 = 50$ 3) $28 + \underline{\quad} = 50$
 4) $\underline{\quad} + 13 = 50$ 5) $17 + \underline{\quad} = 50$ 6) $\underline{\quad} + 31 = 50$
 7) $25 + \underline{\quad} = 50$ 8) $\underline{\quad} + 7 = 50$ 9) $12 + \underline{\quad} = 50$
 10) $50 = \underline{\quad} + 47$ 11) $50 = 27 + \underline{\quad}$ 12) $50 = \underline{\quad} + 16$


Join the bonds: join up the number bonds that add up to make 50.

32	12	16	34	33
18		24	38	41
5	45	26	9	17

Circle the bonds: circle all the pairs of numbers that total 50.

19	5	26	24	43	32
31	24	45	7	11	18
22	41	27	39	15	3
16	28	30	16	14	47
34	13	29	20	36	22
37	1	49	33	28	8

See if you can
find at least 10
pairs!



Name

Date

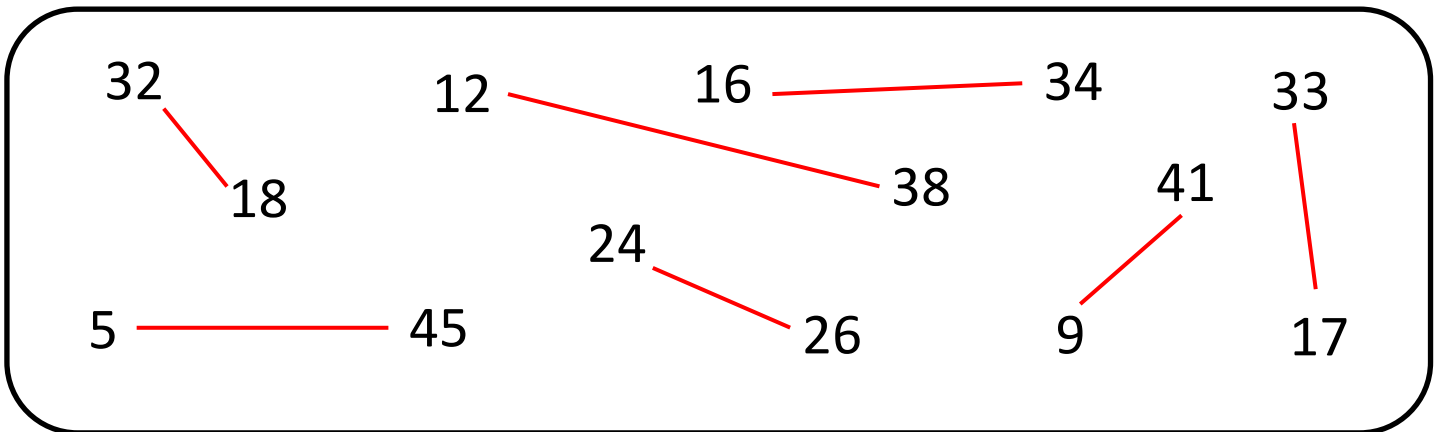


NUMBER BONDS TO 50 SHEET 2 ANSWERS

Fill in the missing numbers to make 50.

- 1) $36 + \underline{14} = 50$ 2) $\underline{9} + 41 = 50$ 3) $28 + \underline{22} = 50$
 4) $\underline{37} + 13 = 50$ 5) $17 + \underline{33} = 50$ 6) $\underline{19} + 31 = 50$
 7) $25 + \underline{25} = 50$ 8) $\underline{43} + 7 = 50$ 9) $12 + \underline{38} = 50$
 10) $50 = \underline{3} + 47$ 11) $50 = 27 + \underline{23}$ 12) $50 = \underline{34} + 16$


Join the bonds: join up the number bonds that add up to make 50.



Circle the bonds: circle all the pairs of numbers that total 50.

19	5	26	24	43	32
31	24	45	7	11	18
22	41	27	39	15	3
16	28	30	16	14	47
34	13	29	20	36	22
37	1	49	33	28	8

See if you can
find at least 10
pairs!



Free Math Sheets, Math Games and Math Help

MATH-SALAMANDERS.COM