

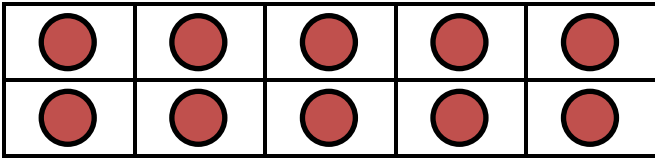
Name _____

Date _____

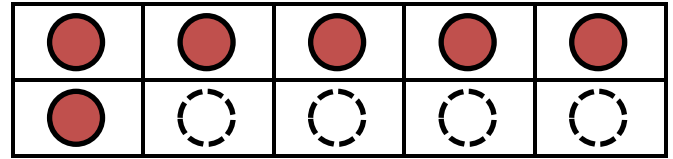


NUMBER BONDS TO 20 SHEET 3

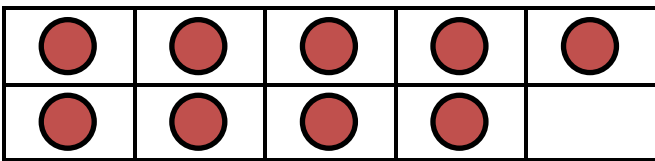
Complete the tens frame and fill in the missing number bond facts.



$16 + 4 = 20 \quad 4 + 16 = 20$



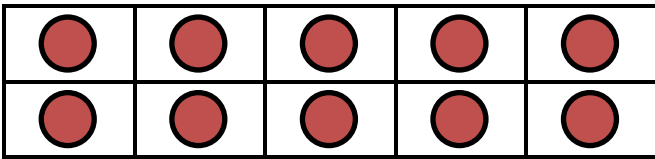
$20 - 16 = 4 \quad 20 - 4 = 16$




$9 + \underline{\quad} = 20 \quad \underline{\quad} + 9 = 20$



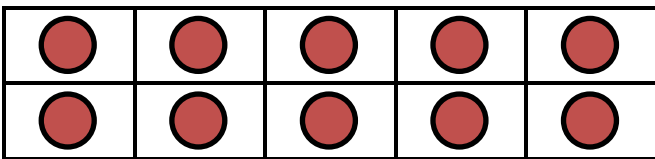
$20 - 9 = \underline{\quad} \quad 20 - \underline{\quad} = 9$



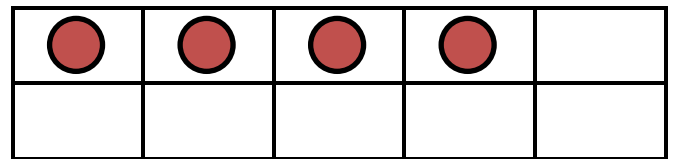
$12 + \underline{\quad} = 20 \quad \underline{\quad} + 12 = 20$



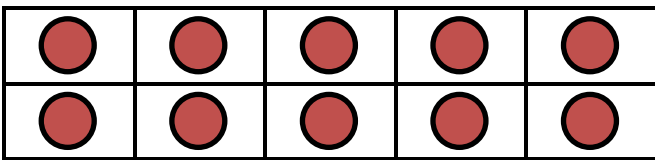
$20 - 12 = \underline{\quad} \quad 20 - \underline{\quad} = 12$



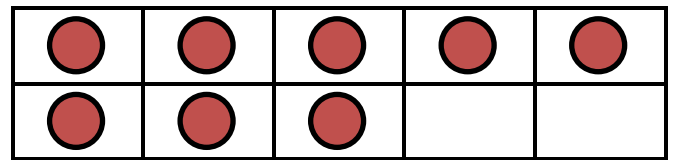
$14 + \underline{\quad} = 20 \quad \underline{\quad} + 14 = 20$



$20 - 14 = \underline{\quad} \quad 20 - \underline{\quad} = 14$



$18 + \underline{\quad} = 20 \quad \underline{\quad} + 18 = 20$



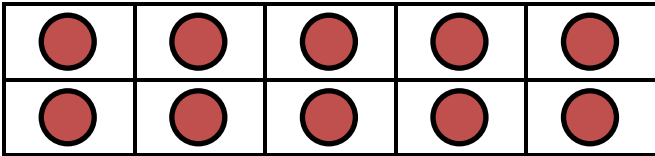
$20 - 18 = \underline{\quad} \quad 20 - \underline{\quad} = 18$

Name

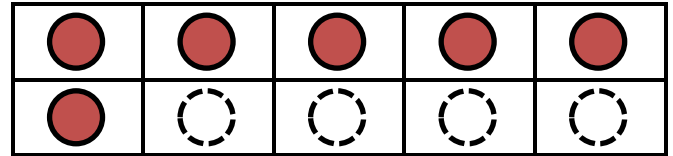
Date



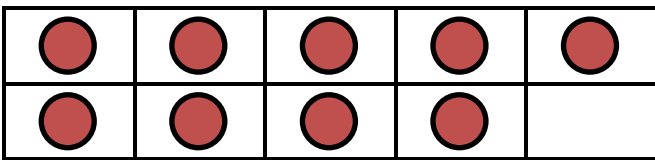
NUMBER BONDS TO 20 SHEET 3 ANSWERS



$16 + 4 = 20 \quad 4 + 16 = 20$



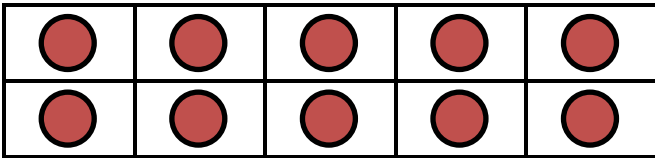
$20 - 16 = 4 \quad 20 - 4 = 16$



$9 + \underline{11} = 20 \quad \underline{11} + 9 = 20$



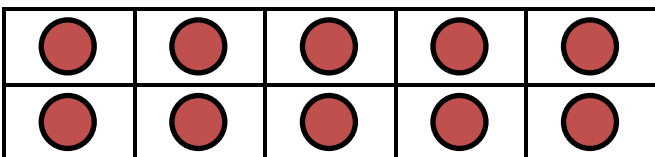
$20 - 9 = \underline{11} \quad 20 - \underline{11} = 9$



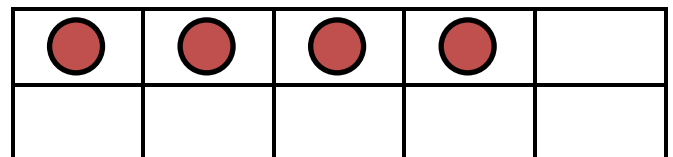
$12 + \underline{8} = 20 \quad \underline{8} + 12 = 20$



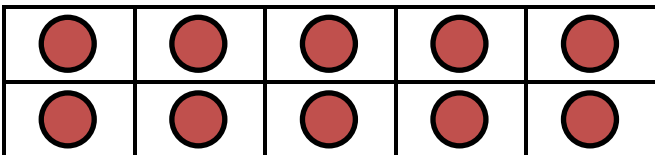
$20 - 12 = \underline{8} \quad 20 - \underline{8} = 12$



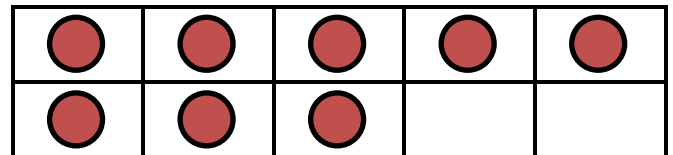
$14 + \underline{6} = 20 \quad \underline{6} + 14 = 20$



$20 - 14 = \underline{6} \quad 20 - \underline{6} = 14$



$18 + \underline{2} = 20 \quad \underline{2} + 18 = 20$



$20 - 18 = \underline{2} \quad 20 - \underline{2} = 18$