

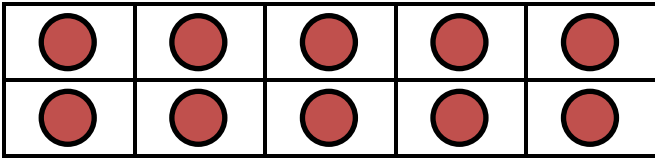
Name _____

Date _____



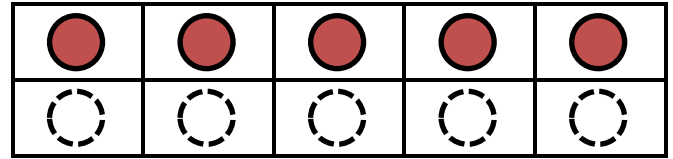
NUMBER BONDS TO 20 SHEET 5

Complete the tens frame and fill in the missing number bond facts.



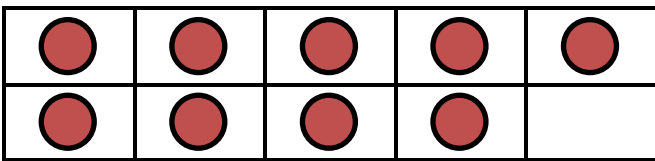
$15 + 5 = 20$

$5 + 15 = 20$




$20 - 15 = 5$

$20 - 5 = 15$



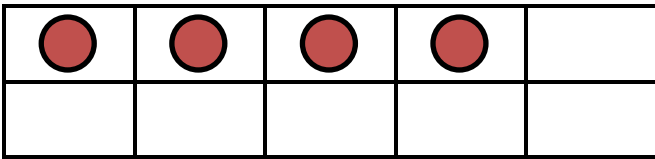
$\underline{\quad} + \underline{\quad} = \underline{\quad}$

$\underline{\quad} + \underline{\quad} = \underline{\quad}$




$\underline{\quad} - \underline{\quad} = \underline{\quad}$

$\underline{\quad} - \underline{\quad} = \underline{\quad}$



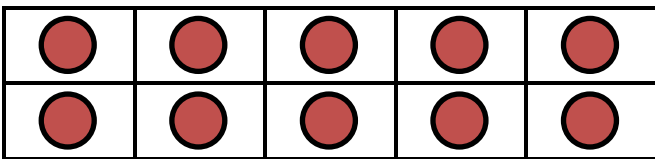
$\underline{\quad} + \underline{\quad} = \underline{\quad}$

$\underline{\quad} + \underline{\quad} = \underline{\quad}$



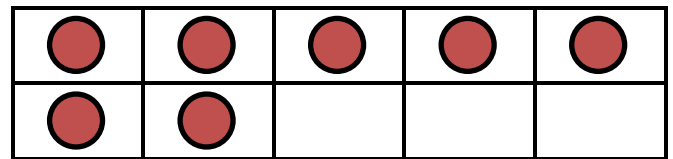
$\underline{\quad} - \underline{\quad} = \underline{\quad}$

$\underline{\quad} - \underline{\quad} = \underline{\quad}$



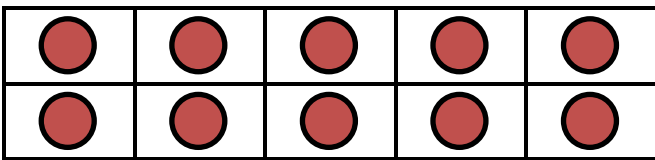
$\underline{\quad} + \underline{\quad} = \underline{\quad}$

$\underline{\quad} + \underline{\quad} = \underline{\quad}$



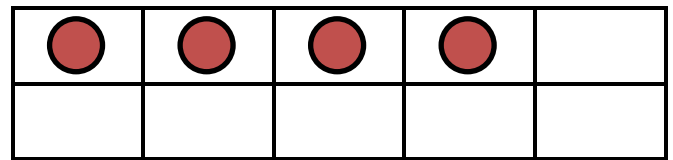
$\underline{\quad} - \underline{\quad} = \underline{\quad}$

$\underline{\quad} - \underline{\quad} = \underline{\quad}$



$\underline{\quad} + \underline{\quad} = \underline{\quad}$

$\underline{\quad} + \underline{\quad} = \underline{\quad}$



$\underline{\quad} - \underline{\quad} = \underline{\quad}$

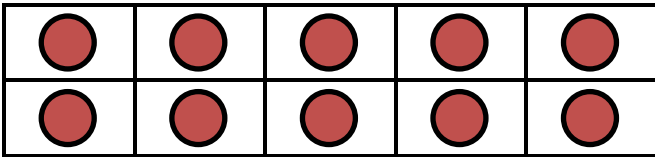
$\underline{\quad} - \underline{\quad} = \underline{\quad}$

Name

Date

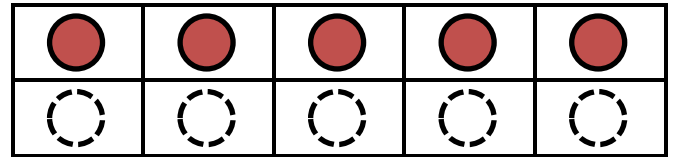


NUMBER BONDS TO 20 SHEET 5 ANSWERS



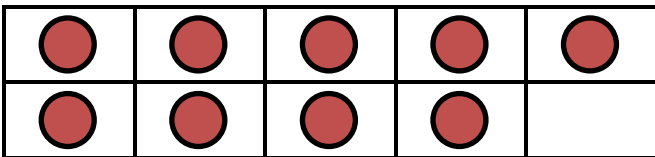
$15 + 5 = 20$

$5 + 15 = 20$




$20 - 15 = 5$

$20 - 5 = 15$



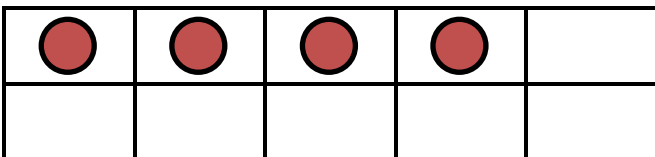
$\underline{9} + \underline{11} = \underline{20}$

$\underline{11} + \underline{9} = \underline{20}$




$\underline{20} - \underline{9} = \underline{11}$

$\underline{20} - \underline{11} = \underline{9}$



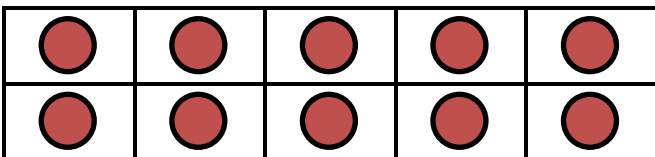
$\underline{4} + \underline{16} = \underline{20}$

$\underline{16} + \underline{4} = \underline{20}$



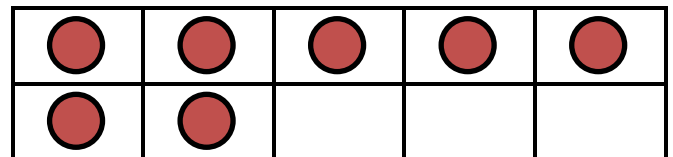
$\underline{20} - \underline{4} = \underline{16}$

$\underline{20} - \underline{16} = \underline{4}$



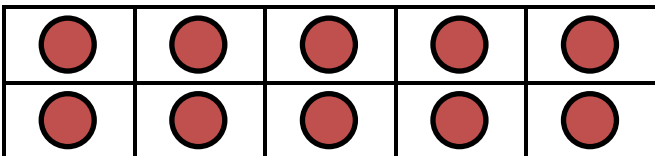
$\underline{17} + \underline{3} = \underline{20}$

$\underline{3} + \underline{17} = \underline{20}$



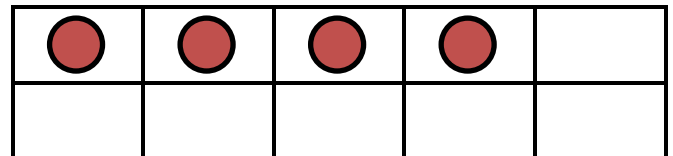
$\underline{20} - \underline{17} = \underline{3}$

$\underline{20} - \underline{3} = \underline{17}$



$\underline{14} + \underline{6} = \underline{20}$

$\underline{6} + \underline{14} = \underline{20}$



$\underline{20} - \underline{14} = \underline{6}$

$\underline{20} - \underline{6} = \underline{14}$