


Name \_\_\_\_\_

Date \_\_\_\_\_



# WHO HAS MOST? SHEET 1

1) Circle the frog with the **most** spots.



2) Circle the **biggest** number.

4

3



1

2

3) Circle the bucket with the **most** holes.



4) Circle the animal with the **most** legs.




Name

Date



# WHO HAS MOST? SHEET 1 ANSWERS

1) Circle the frog with the **most** spots.



2) Circle the **biggest** number.

4

3


1

2

3) Circle the bucket with the **most** holes.



4) Circle the animal with the **most** legs.



Free Math Sheets, Math Games and Math Help

MATH-SALAMANDERS.COM