

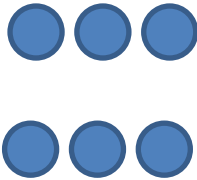
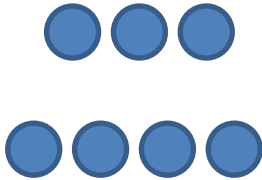
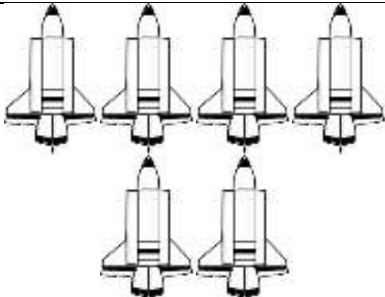







Name

Date



GREATER, LESS AND EQUAL SHEET 4

Circle the correct choice.

1)		is greater than > is equal to = is less than <	
2)		is greater than > is equal to = is less than <	
3)		is greater than > is equal to = is less than <	
4)		is greater than > is equal to = is less than <	
5)	8	is greater than > is equal to = is less than <	9
6)		is greater than > is equal to = is less than <	

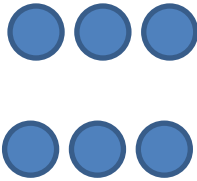

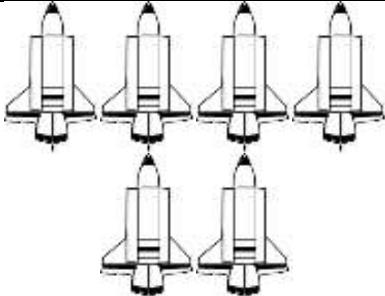


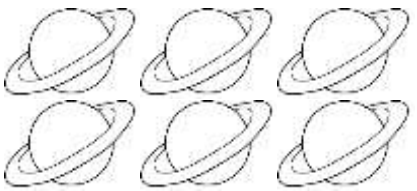



Name

Date



GREATER, LESS AND EQUAL SHEET 4 ANSWERS

Circle the correct choice.

1)		<p>is greater than ></p> <p>is equal to =</p> <p>is less than <</p>	
2)		<p>is greater than ></p> <p>is equal to =</p> <p>is less than <</p>	
3)		<p>is greater than ></p> <p>is equal to =</p> <p>is less than <</p>	
4)		<p>is greater than ></p> <p>is equal to =</p> <p>is less than <</p>	
5)	8	<p>is greater than ></p> <p>is equal to =</p> <p>is less than <</p>	9
6)		<p>is greater than ></p> <p>is equal to =</p> <p>is less than <</p>	