

Name

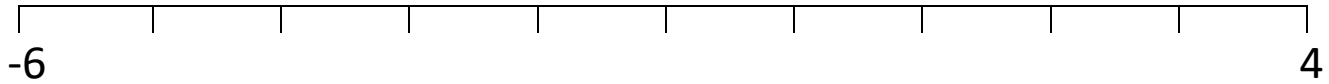
Date



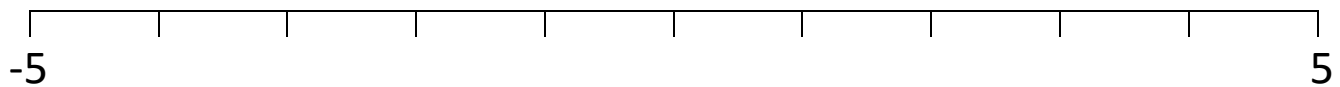
POSITIONING NEGATIVE NUMBERS -10 TO 10 SHEET 4

Write the numbers in the correct place on the number lines below.

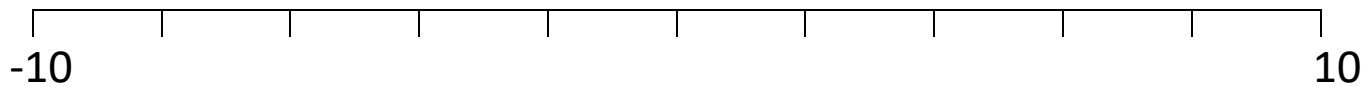
A) $0, 1\frac{1}{2}, -2, -3\frac{1}{2}$



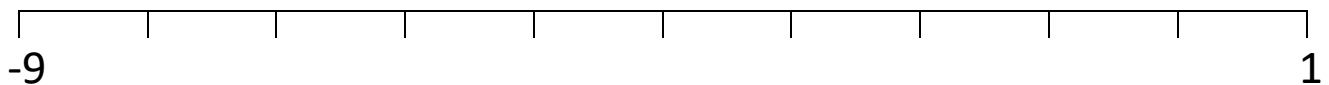
B) $0, -\frac{1}{2}, 3\frac{1}{2}, -2\frac{1}{2}, -4$



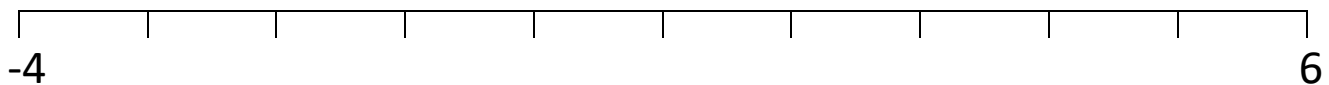
C) $0, 5, -7, -3, 1$



D) $0, -1\frac{1}{2}, -6\frac{1}{2}, -8, -4\frac{1}{2}$



E) $0, 3\frac{1}{2}, -1\frac{1}{2}, 5, -2\frac{1}{2}$



Remember $-3\frac{1}{2}$ is half-way between -3 and -4 .



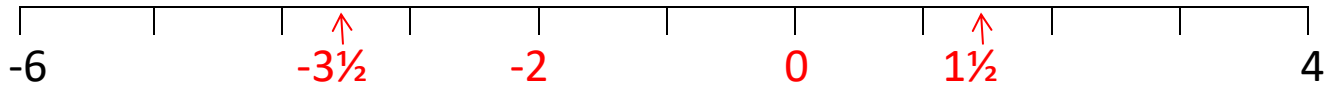


POSITIONING NEGATIVE NUMBERS -10 TO 10

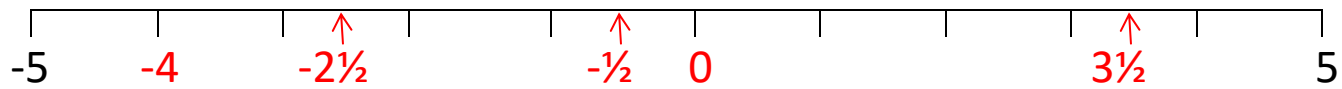
SHEET 4 ANSWERS

Write the numbers in the correct place on the number lines below.

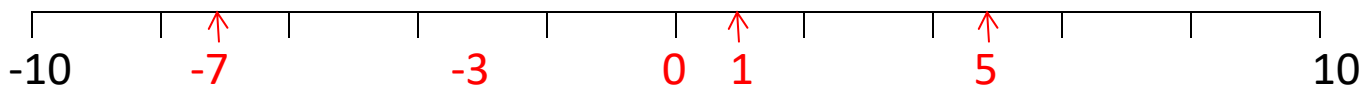
A) $0, 1\frac{1}{2}, -2, -3\frac{1}{2}$



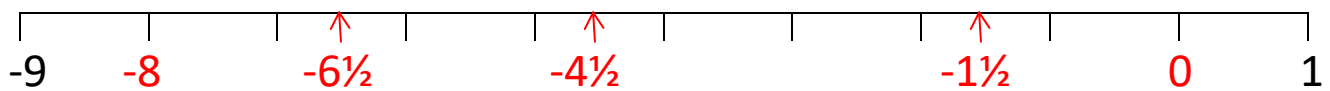
B) $0, -\frac{1}{2}, 3\frac{1}{2}, -2\frac{1}{2}, -4$



C) $0, 5, -7, -3, 1$



D) $0, -1\frac{1}{2}, -6\frac{1}{2}, -8, -4\frac{1}{2}$



E) $0, 3\frac{1}{2}, -1\frac{1}{2}, 5, -2\frac{1}{2}$

