

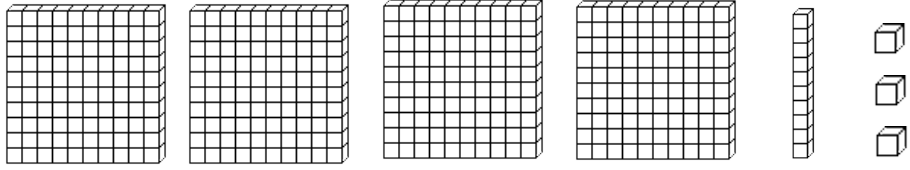
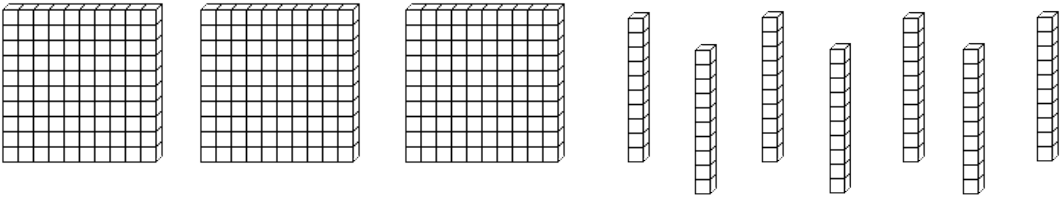
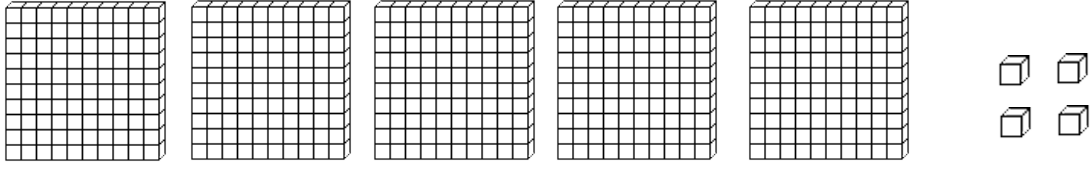
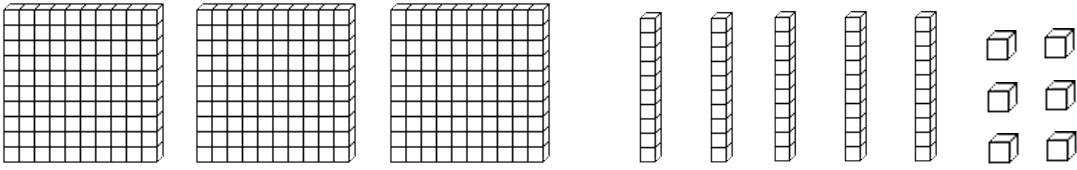
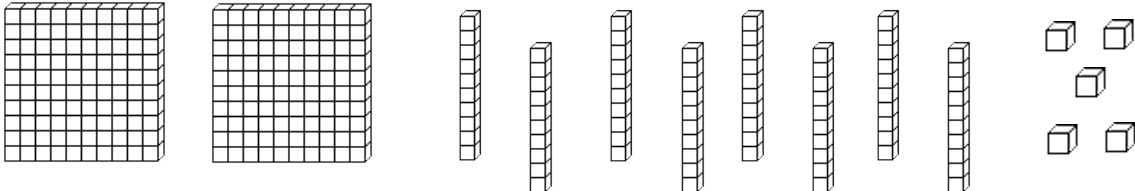
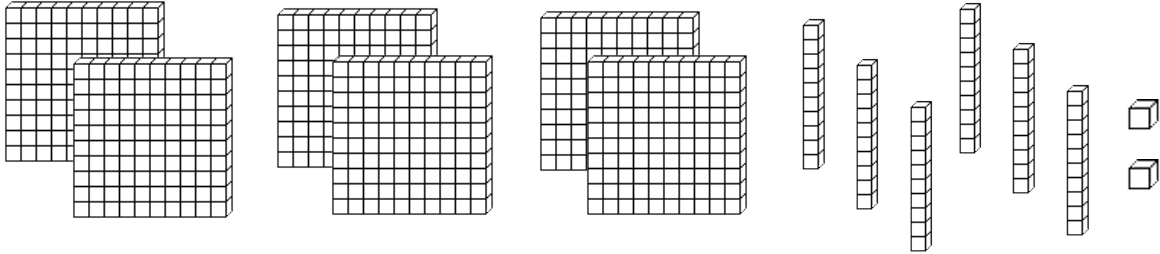
Name \_\_\_\_\_

Date \_\_\_\_\_



# PLACE VALUE BLOCKS: UP TO HUNDREDS SHEET 3

Help Flame Salamander count the blocks.

	How many? _____
	How many? _____
	How many? _____
	How many? _____
	How many? _____
	How many? _____



Name

Date



# PLACE VALUE BLOCKS: UP TO HUNDREDS SHEET 3 ANSWERS

	<p>How many?</p> <p><u>413</u></p>
	<p>How many?</p> <p><u>370</u></p>
	<p>How many?</p> <p><u>504</u></p>
	<p>How many?</p> <p><u>356</u></p>
	<p>How many?</p> <p><u>285</u></p>
	<p>How many?</p> <p><u>662</u></p>



Free Math Sheets, Math Games and Math Help

[MATH-SALAMANDERS.COM](http://MATH-SALAMANDERS.COM)