

Name

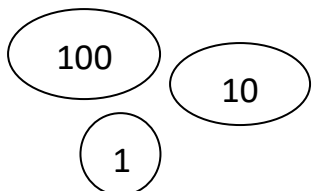
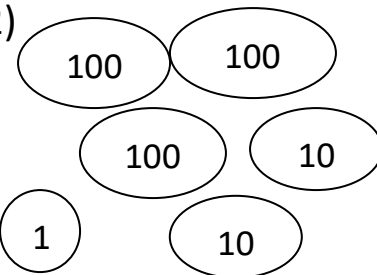
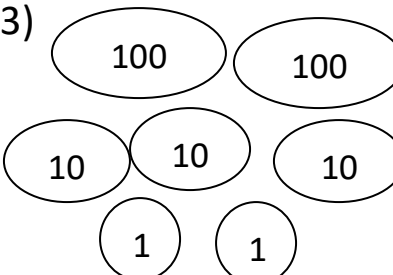
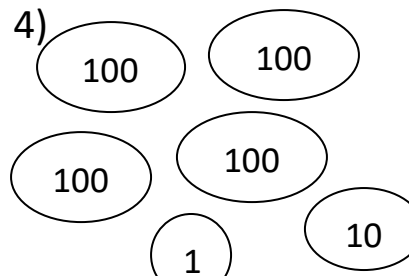
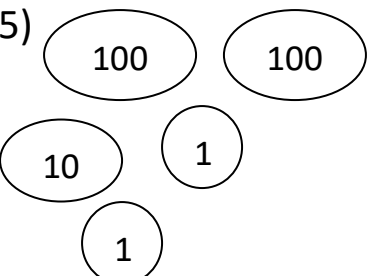
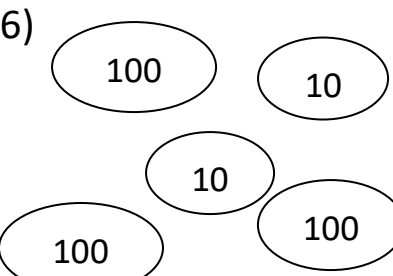
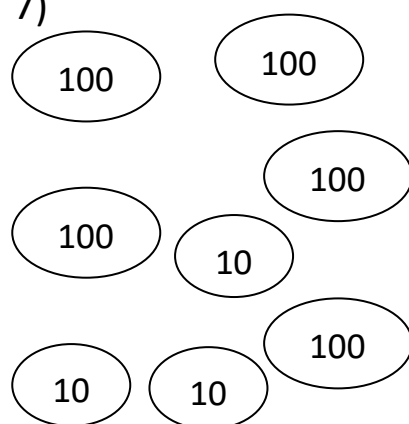
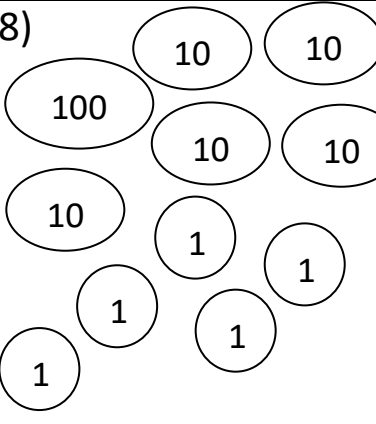
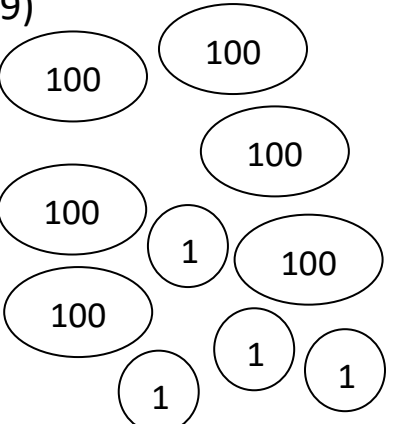
Date



PLACE VALUE COUNTING: UP TO HUNDREDS SHEET 1

Count the total in each box.

Remember to count the Hundreds first then the Tens, and then the Ones.

1) 	2) 	3) 
How many?	How many?	How many?
4) 	5) 	6) 
How many?	How many?	How many?
7) 	8) 	9) 
How many?	How many?	How many?



Free Math Sheets, Math Games and Math Help

MATH-SALAMANDERS.COM

Name

Date



PLACE VALUE COUNTING: UP TO HUNDREDS

SHEET 1 ANSWERS

1)	2)	3)
How many? <u>111</u>	How many? <u>321</u>	How many? <u>232</u>
4)	5)	6)
How many? <u>411</u>	How many? <u>212</u>	How many? <u>320</u>
7)	8)	9)
How many? <u>530</u>	How many? <u>155</u>	How many? <u>604</u>

