

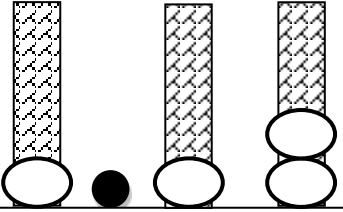
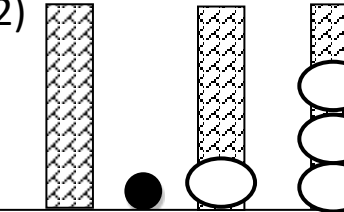
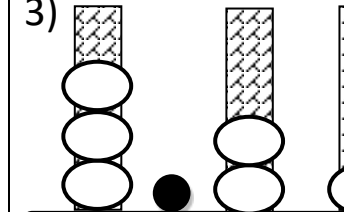
Name

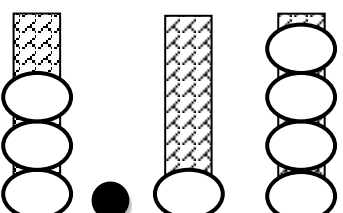
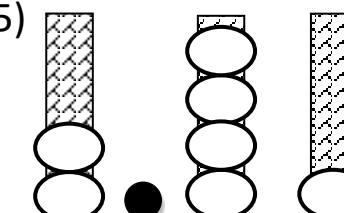
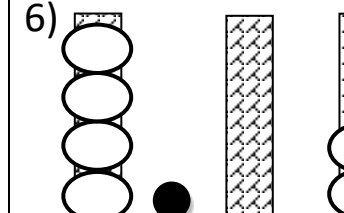
Date



# PLACE VALUE: TENTHS & HUNDREDTHS SHEET 1

Count the number of ONES, TENTHS and HUNDREDTHS then put them together.

1) 	2) 	3) 
ONES      TENTHS      HUNDTHS	ONES      TENTHS      HUNDTHS	ONES      TENTHS      HUNDTHS
How many? 1.12	How many?	How many?

4) 	5) 	6) 
ONES      TENTHS      HUNDTHS	ONES      TENTHS      HUNDTHS	ONES      TENTHS      HUNDTHS
How many?	How many?	How many?

7) 1 ONES + 2 TENTHS + 3 HUNDREDTHS	8) 2 ONES + 4 TENTHS + 5 HUNDREDTHS	9) 7 ONES + 1 TENTH + 6 HUNDREDTHS
How many?	How many?	How many?

10) 5 TENTHS + 2 HUNDREDTHS	11) 2 TENTHS + 3 HUNDREDTHS	12) 4 ONES + 2 TENTHS + 4 HUNDREDTHS
How many?	How many?	How many?

13) 6 ONES + 8 HUNDREDTHS	14) 7 ONES + 4 HUNDREDTHS	15) 4 ONES + 9 TENTHS + 6 HUNDREDTHS
How many?	How many?	How many?

16) 7 ONES + 3 TENTHS 8 HUNDREDTHS	17) 9 ONES + 6 HUNDREDTHS	18) 2 ONES + 4 TENTHS + 2 HUNDREDTHS
How many?	How many?	How many?

Remember to use a decimal point between the ones and the tenths.

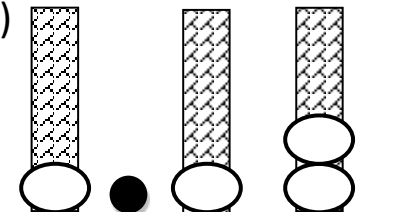
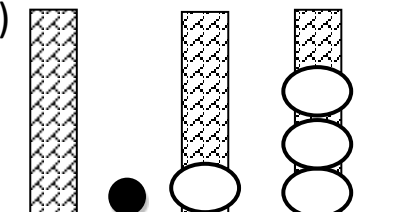
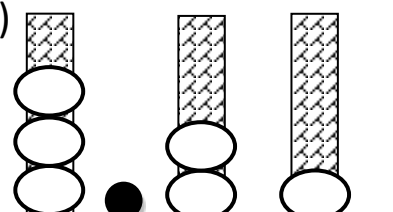


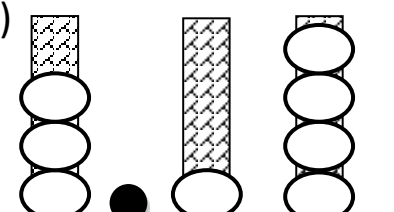
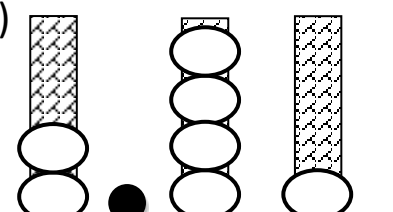
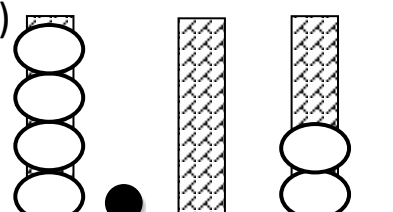
Name

Date



# PLACE VALUE: TENTHS & HUNDREDTHS SHEET 1 ANSWERS

1) 	2) 	3) 
ONES      TENTHS    HUNDTHS	ONES      TENTHS    HUNDTHS	ONES      TENTHS    HUNDTHS
How many? <u>1.12</u>	How many? <u>0.13</u>	How many? <u>3.21</u>

4) 	5) 	6) 
ONES      TENTHS    HUNDTHS	ONES      TENTHS    HUNDTHS	ONES      TENTHS    HUNDTHS
How many? <u>3.14</u>	How many? <u>2.41</u>	How many? <u>4.02</u>

7) 1 ONES + 2 TENTHS + 3 HUNDREDTHS	8) 2 ONES + 4 TENTHS + 5 HUNDREDTHS	9) 7 ONES + 1 TENTH + 6 HUNDREDTHS
How many? <u>1.23</u>	How many? <u>2.45</u>	How many? <u>7.16</u>

10) 5 TENTHS + 2 HUNDREDTHS	11) 2 TENTHS + 3 HUNDREDTHS	12) 4 ONES + 2 TENTHS + 4 HUNDREDTHS
How many? <u>0.52</u>	How many? <u>0.23</u>	How many? <u>4.24</u>

13) 6 ONES + 8 HUNDREDTHS	14) 7 ONES + 4 HUNDREDTHS	15) 4 ONES + 9 TENTHS + 6 HUNDREDTHS
How many? <u>6.08</u>	How many? <u>7.04</u>	How many? <u>4.96</u>

16) 7 ONES + 3 TENTHS 8 HUNDREDTHS	17) 9 ONES + 6 HUNDREDTHS	18) 2 ONES + 4 TENTHS + 2 HUNDREDTHS
How many? <u>7.38</u>	How many? <u>9.06</u>	How many? <u>2.42</u>



Free Math Sheets, Math Games and Math Help

[MATH-SALAMANDERS.COM](http://MATH-SALAMANDERS.COM)