

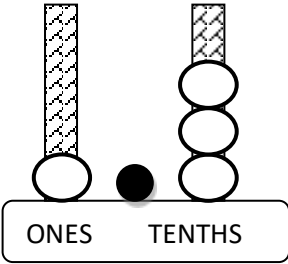
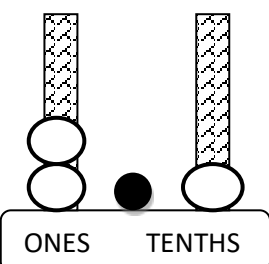
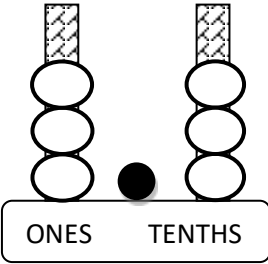
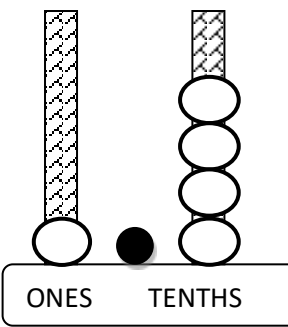
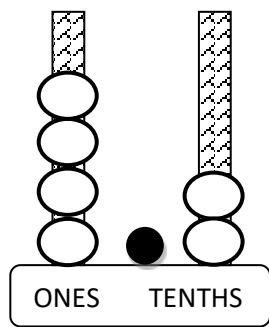
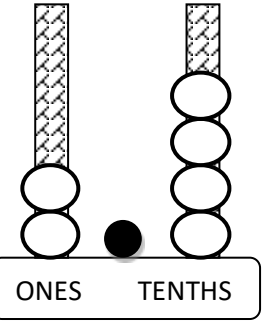
Name

Date



PLACE VALUE: TENTHS SHEET 1

Count the number of ONES and TENTHS and then put them together.

1) 	2) 	3) 
How many? 1.3	How many?	How many?
		
How many?	How many?	How many?
7) 1 ONES + 2 TENTHS	8) 3 ONES + 2 TENTHS	9) 5 ONES + 4 TENTHS
How many?	How many?	How many?
10) 5 TENTHS + 2 ONES	11) 2 TENTHS + 13 ONES	12) 4 TENTHS + 23 ONES
How many?	How many?	How many?
13) 5 TENS + 6 ONES + 4 TENTHS	14) 7 TENS + 3 ONES + 8 TENTHS	15) 4 TENS + 9 ONES + 6 TENTHS
How many?	How many?	How many?
16) 3 TENS + 5 ONES + 9 TENTHS	17) 9 TENS + 6 ONES + 4 TENTHS	18) 4 TENS + 3 TENTHS
How many?	How many?	How many?

Remember to use a decimal point between the ones and the tenths.

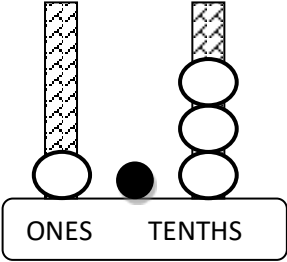
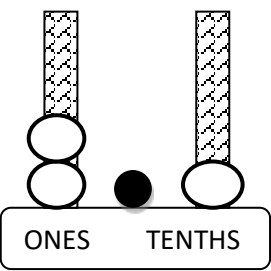
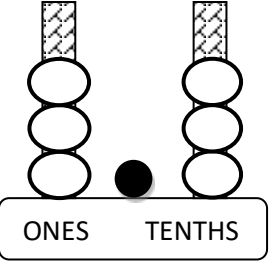
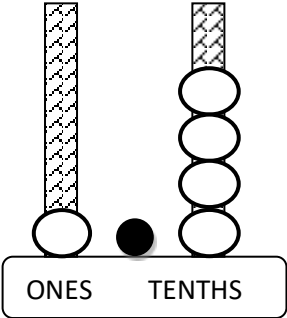
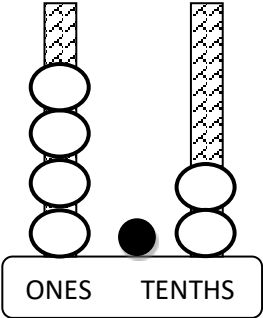
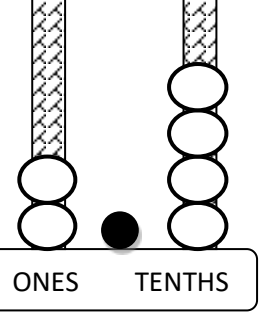


Name

Date



PLACE VALUE: TENTHS SHEET 1 ANSWERS

1) 	2) 	3) 
How many? <u>1.3</u>	How many? <u>2.1</u>	How many? <u>3.3</u>
		
How many? <u>1.4</u>	How many? <u>4.2</u>	How many? <u>2.4</u>
7) 1 ONES + 2 TENTHS	8) 3 ONES + 2 TENTHS	9) 5 ONES + 4 TENTHS
How many? <u>1.2</u>	How many? <u>3.2</u>	How many? <u>5.4</u>
10) 5 TENTHS + 2 ONES	11) 2 TENTHS + 13 ONES	12) 4 TENTHS + 23 ONES
How many? <u>2.5</u>	How many? <u>13.2</u>	How many? <u>23.4</u>
13) 5 TENS + 6 ONES + 4 TENTHS	14) 7 TENS + 3 ONES + 8 TENTHS	15) 4 TENS + 9 ONES + 6 TENTHS
How many? <u>56.4</u>	How many? <u>73.8</u>	How many? <u>49.6</u>
16) 3 TENS + 5 ONES + 9 TENTHS	17) 9 TENS + 6 ONES + 4 TENTHS	18) 4 TENS + 3 TENTHS
How many? <u>35.9</u>	How many? <u>96.4</u>	How many? <u>40.3</u>



Free Math Sheets, Math Games and Math Help

MATH-SALAMANDERS.COM