



ROUNDING TO THE NEAREST 100 SHEET 2

- Write down the value of each number marked by an arrow.
- Round the number to the nearest 100.

Remember: if the number is exactly half-way, it rounds up to the next 100.

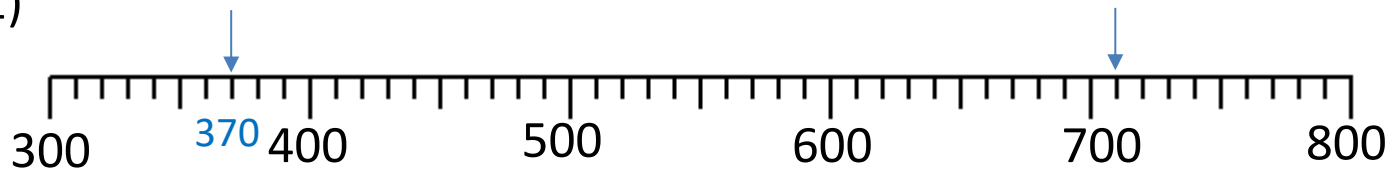
Example



450 to the nearest 100 is 500

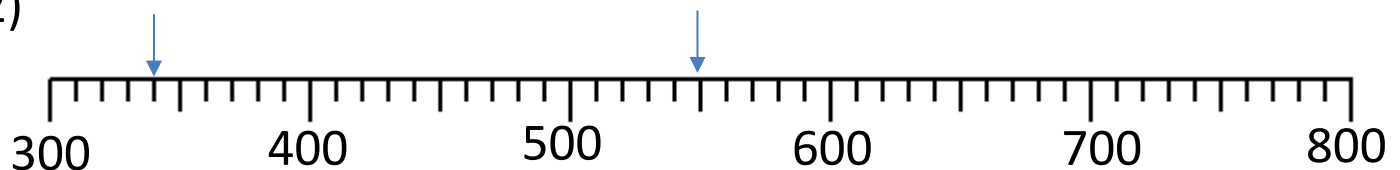
630 to the nearest 100 is 600

1)



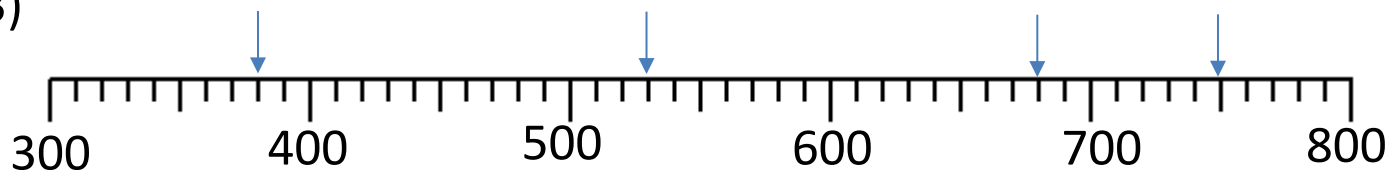
370 to the nearest 100 is _____ to the nearest 100 is _____

2)



_____ to the nearest 100 is _____ to the nearest 100 is _____

3)



_____ to the nearest 100 is _____ to the nearest 100 is _____

_____ to the nearest 100 is _____ to the nearest 100 is _____

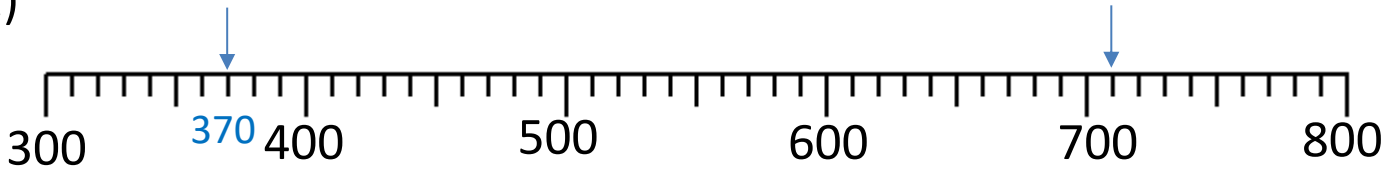
Name

Date



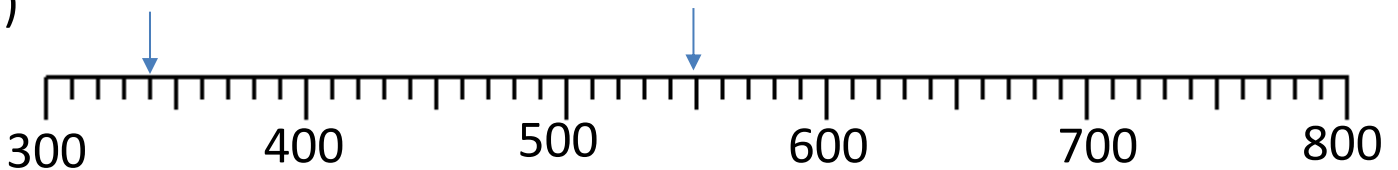
ROUNDING TO THE NEAREST 100 SHEET 2 ANSWERS

1)



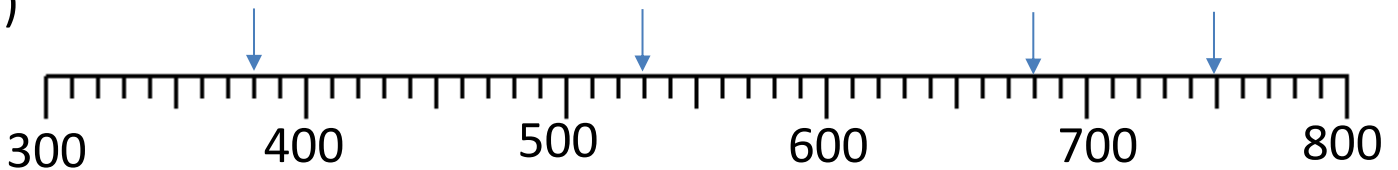
370 to the nearest 100 is 400 710 to the nearest 100 is 700

2)



340 to the nearest 100 is 300 550 to the nearest 100 is 600

3)



370 to the nearest 100 is 400 530 to the nearest 100 is 500

680 to the nearest 100 is 700 750 to the nearest 100 is 800

