

Name _____

Date _____



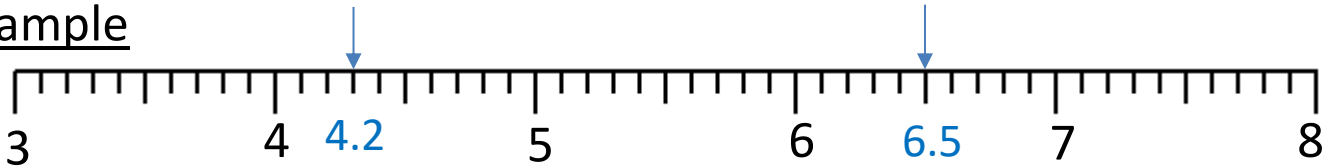
ROUNDING TO THE NEAREST WHOLE SHEET 2

Write down the value of each number marked by an arrow.

Round the number to the nearest one.

Remember: if the number is exactly half-way, it will round up to the next one.

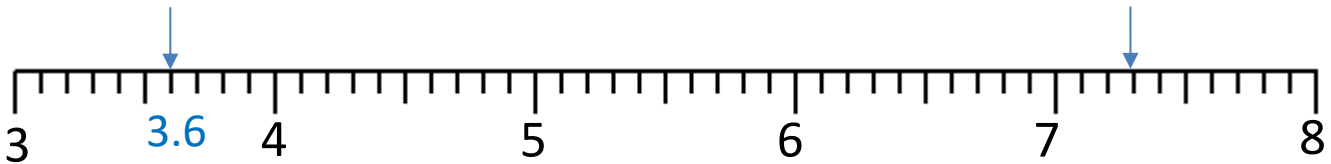
Example



4.2 to the nearest 1 is 4

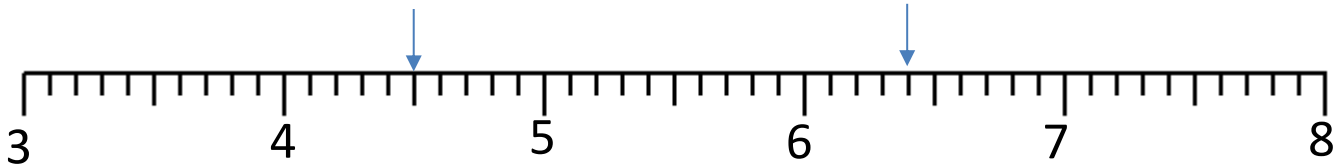
6.5 to the nearest 1 is 7

1)



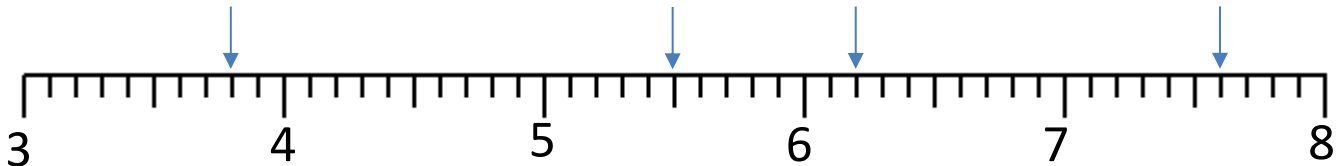
3.6 to the nearest one is _____ to the nearest one is _____

2)



_____ to the nearest one is _____ to the nearest one is _____

3)



_____ to the nearest 1 is _____ to the nearest 1 is _____

_____ to the nearest 1 is _____ to the nearest 1 is _____

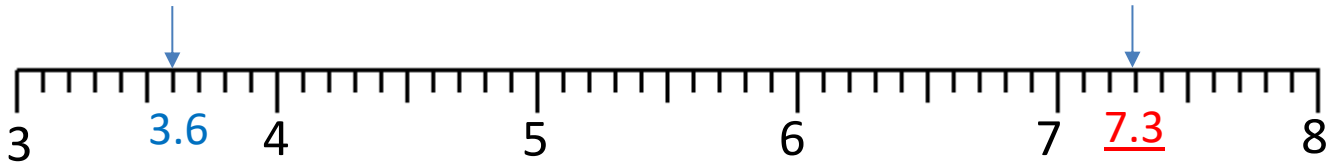
Name

Date



ROUNDING TO THE NEAREST WHOLE SHEET 2 ANSWERS

1)



3.6 to the nearest one is 4

7.3 to the nearest one is 7

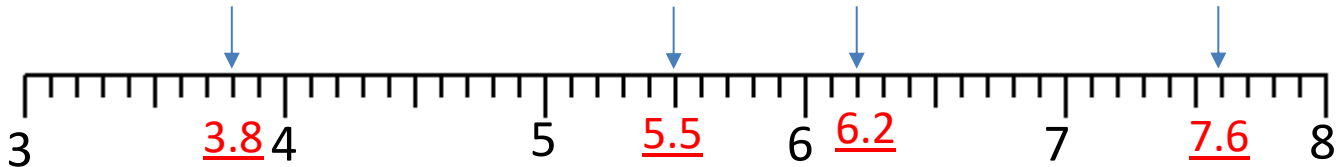
2)



4.5 to the nearest one is 5

6.4 to the nearest one is 6

3)



3.8 to the nearest 1 is 4

5.5 to the nearest 1 is 6

6.2 to the nearest 1 is 6

7.6 to the nearest 1 is 8

