

Name

Date



CHRISTMAS SQUARE ADDING PUZZLE 2A

Each picture below has a value shown in the boxes below.



6



5



















3



4

Work out the total of each horizontal and vertical line of the puzzle.

= 20

= _____

= _____

= _____

= _____

= _____

= _____

= _____

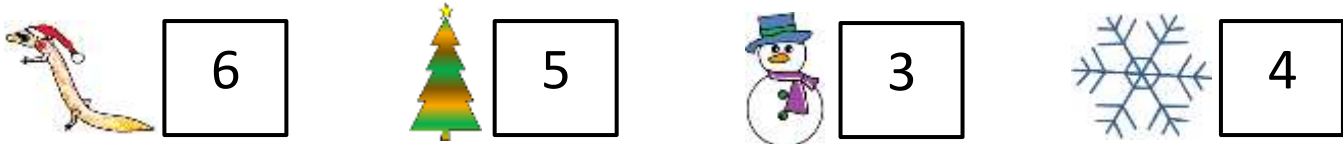
Name

Date



CHRISTMAS SQUARE ADDING PUZZLE 2A ANSWERS

Each picture below has a value shown in the boxes below.



Work out the total of each horizontal and vertical line of the puzzle.

				= 20
				= <u>19</u>
				= <u>15</u>
				= <u>18</u>
= <u>18</u>	= <u>20</u>	= <u>17</u>	= <u>17</u>	