
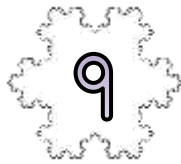

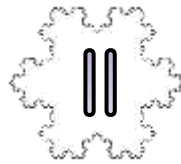




# SNOWFLAKE ADDING MAZE 2C: TARGET 30

- Start the maze with zero.
- Add on the number on each snowflake as you go.
- You have to get to the finish with a total of 30.
- You must follow one of the arrows each time.

## START



## END

Write down the numbers in the route here:

$$\underline{\quad} + \underline{\quad} + \underline{\quad} + \underline{\quad} = 30$$

### Extra Challenge

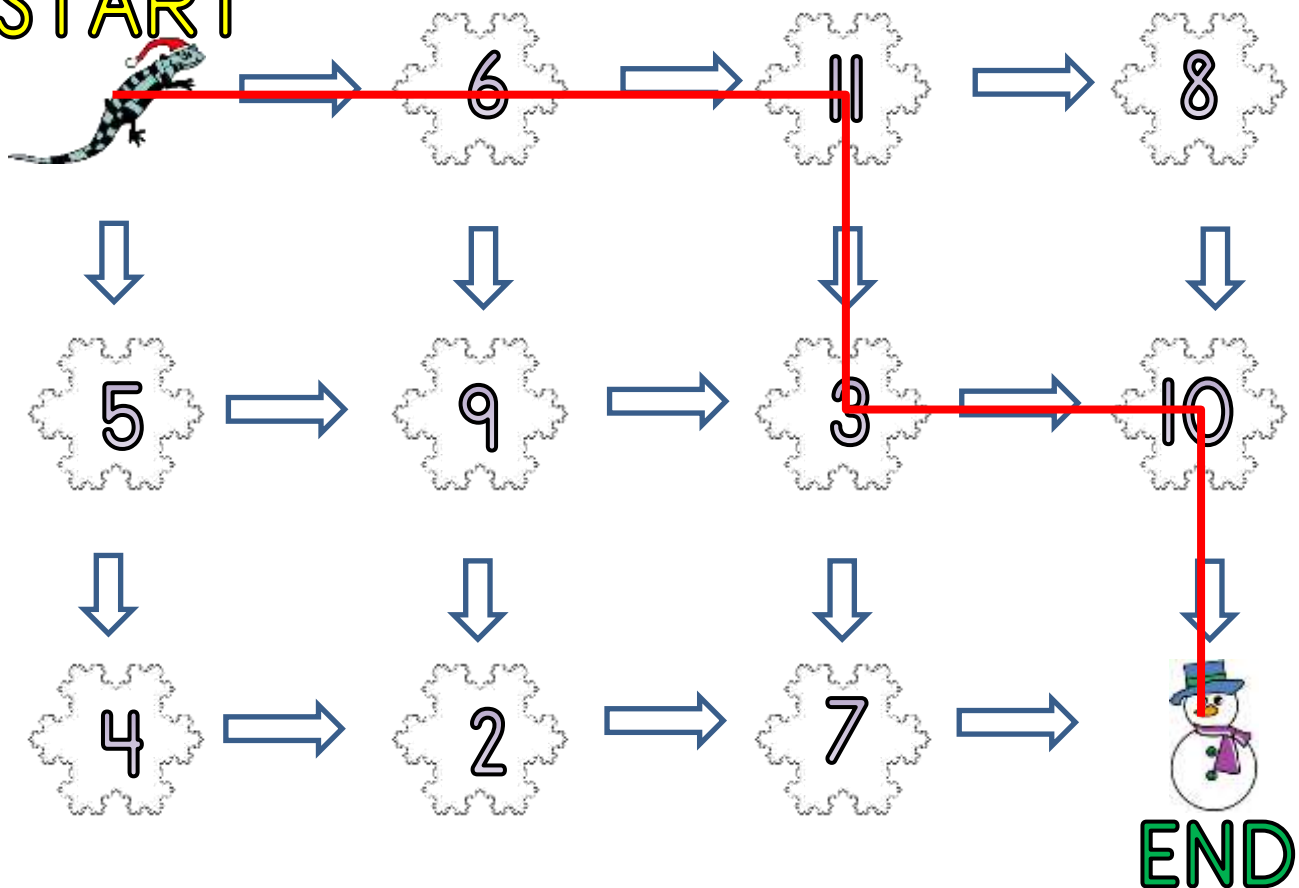
Find the route with the **highest** total.  $\underline{\quad} + \underline{\quad} + \underline{\quad} + \underline{\quad} = \underline{\quad}$



# SNOWFLAKE ADDING MAZE 2C: ANSWERS

- Start the maze with zero.
- Add on the number on each snowflake as you go.
- You have to get to the finish with a total of 30.
- You must follow one of the arrows each time.

## START



Write down the numbers in the route here:

$$\underline{6} + \underline{11} + \underline{3} + \underline{10} = 30$$

### Extra Challenge

Find the route with the **highest** total.  $\underline{6} + \underline{11} + \underline{8} + \underline{10} = \underline{35}$