

Name

Date



















CHRISTMAS SQUARE ADDING PUZZLE 3A

Each picture below has a value shown in the box beside it.

| | | | | | | | |
|---|----|---|---|---|---|---|---|
|  | 11 |  | 7 |  | 8 |  | 6 |
|---|----|---|---|---|---|---|---|

Work out the total of each horizontal and vertical line of the puzzle.

| | | | | |
|---|---|--|---|-----------------------|
|  |  |  |  | $= 27$ |
|  |  |  |  | $= \underline{\quad}$ |
|  |  |  |  | $= \underline{\quad}$ |
|  |  |  |  | $= \underline{\quad}$ |
| $= \underline{\quad}$ | $= \underline{\quad}$ | $= \underline{\quad}$ | $= \underline{\quad}$ | |

Name

Date



CHRISTMAS SQUARE ADDING PUZZLE 3A ANSWERS

Each picture below has a value shown in the box beside it.



11



7



















8



6

Work out the total of each horizontal and vertical line of the puzzle.

| | | | | |
|---|---|--|---|-------------|
|  |  |  |  | = 27 |
|  |  |  |  | = <u>37</u> |
|  |  |  |  | = <u>31</u> |
|  |  |  |  | = <u>33</u> |
| = <u>31</u> | = <u>32</u> | = <u>34</u> | = <u>31</u> | |