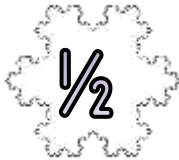

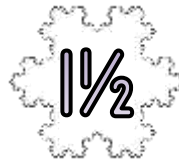




SNOWFLAKE ADDING MAZE 4B: TARGET 10

- Start the maze with zero.
- Add on the number on each snowflake as you go.
- You have to get to the finish with a total of 10.
- You must follow one of the arrows each time.

START



END

Write down the numbers in the route here:

$$\underline{\quad} + \underline{\quad} + \underline{\quad} + \underline{\quad} = 10$$

Extra Challenge

Find the route with the **highest** total. $\underline{\quad} + \underline{\quad} + \underline{\quad} + \underline{\quad} = \underline{\quad}$

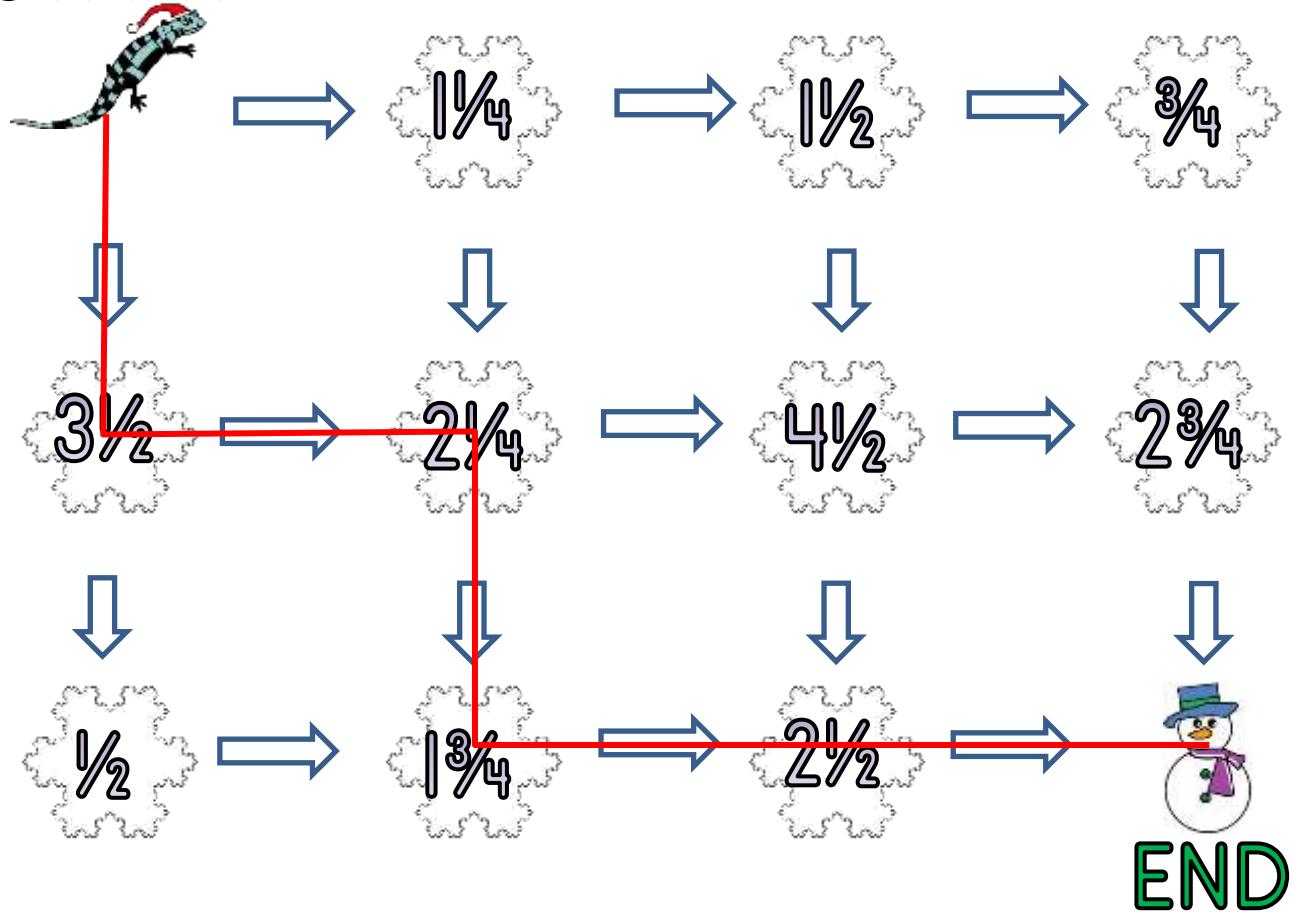
Find the route with the **lowest** total. $\underline{\quad} + \underline{\quad} + \underline{\quad} + \underline{\quad} = \underline{\quad}$



SNOWFLAKE ADDING MAZE 4B: ANSWERS

- Start the maze with zero.
- Add on the number on each snowflake as you go.
- You have to get to the finish with a total of 10.
- You must follow one of the arrows each time.

START



Write down the numbers in the route here:

$$\underline{3\frac{1}{2}} + \underline{2\frac{1}{4}} + \underline{1\frac{3}{4}} + \underline{2\frac{1}{2}} = 10$$

Extra Challenge

Find the route with the **highest** total. $\underline{3\frac{1}{2}} + \underline{2\frac{1}{4}} + \underline{4\frac{1}{2}} + \underline{2\frac{3}{4}} = \underline{13}$

Find the route with the **lowest** total. $\underline{1\frac{1}{4}} + \underline{1\frac{1}{2}} + \underline{\frac{3}{4}} + \underline{2\frac{3}{4}} = \underline{6\frac{1}{4}}$