

Name _____

Date _____



















CHRISTMAS SQUARE ADDING PUZZLE 5A

Each picture below has a value shown in the box beside it.

	<table border="1"><tr><td>1.3</td></tr></table>	1.3		<table border="1"><tr><td>0.7</td></tr></table>	0.7		<table border="1"><tr><td>0.5</td></tr></table>	0.5		<table border="1"><tr><td>0.9</td></tr></table>	0.9
1.3											
0.7											
0.5											
0.9											

Work out the total of each horizontal and vertical line of the puzzle.

				= 3.4
				= _____
				= _____
				= _____
= _____	= _____	= _____	= _____	

Name

Date



















CHRISTMAS SQUARE ADDING PUZZLE 5A ANSWERS

Each picture below has a value shown in the box beside it.



Work out the total of each horizontal and vertical line of the puzzle.

				= 3.4
				= <u>3.2</u>
				= <u>3.8</u>
				= <u>3.2</u>
= <u>3.6</u>	= <u>3.4</u>	= <u>3</u>	= <u>3.6</u>	