
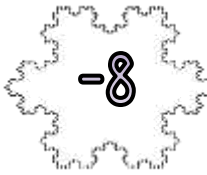
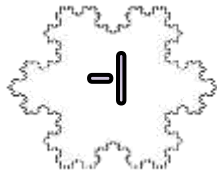
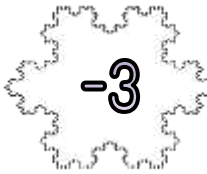
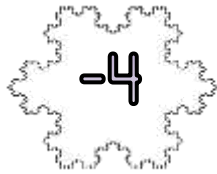




SNOWFLAKE ADDING MAZE 5C: TARGET -10

- Start the maze with zero.
- Add on the number on each snowflake as you go.
- You have to get to the finish with a total of -10.
- You must follow one of the arrows each time.

START



END

Write down the numbers in the route here:

$$\underline{\quad} + \underline{\quad} + \underline{\quad} + \underline{\quad} = -10$$

Extra Challenge

Find the route with the **highest** total. $\underline{\quad} + \underline{\quad} + \underline{\quad} + \underline{\quad} = \underline{\quad}$

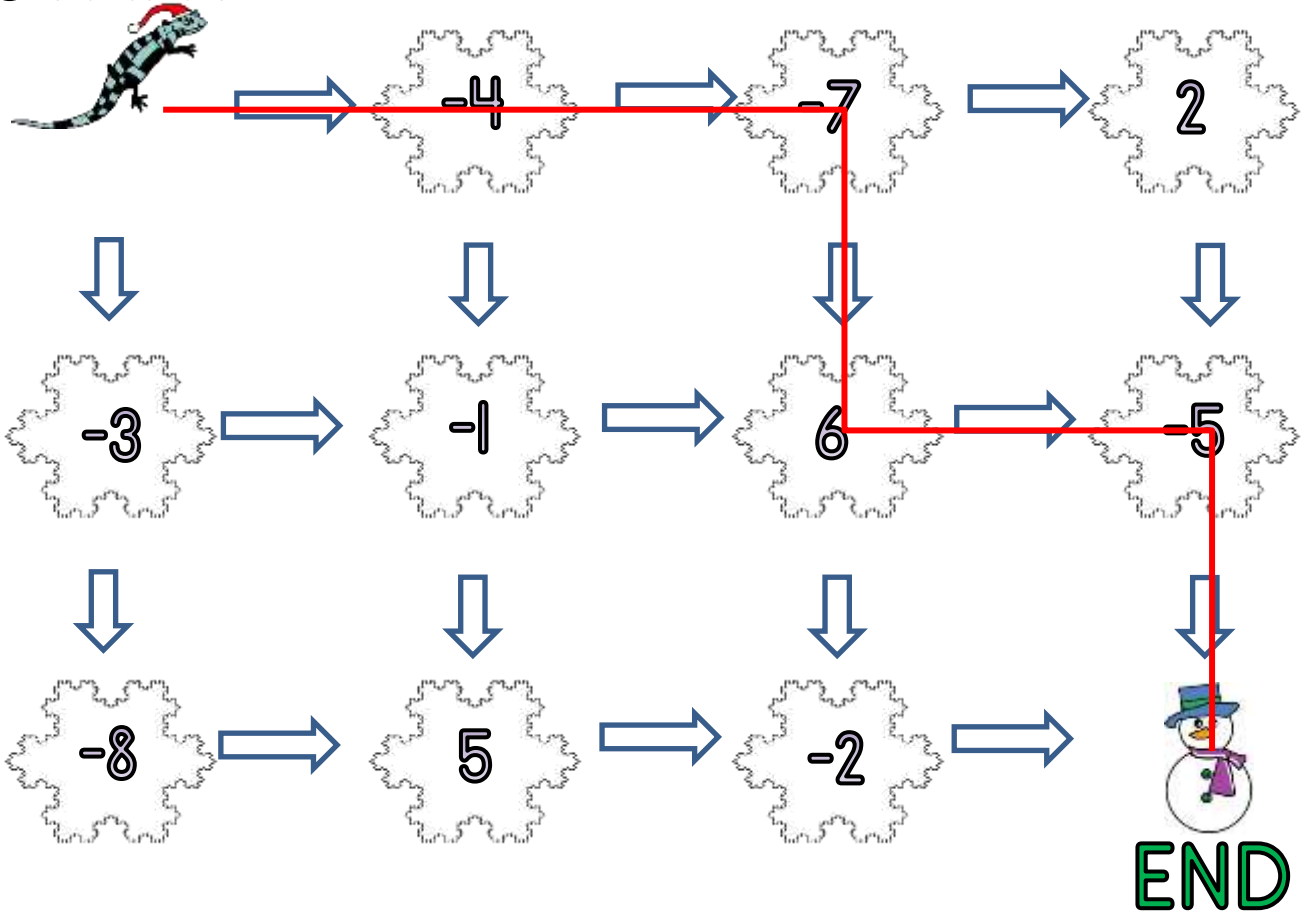
Find the route with the **lowest** total. $\underline{\quad} + \underline{\quad} + \underline{\quad} + \underline{\quad} = \underline{\quad}$



SNOWFLAKE ADDING MAZE 5C: ANSWERS

- Start the maze with zero.
- Add on the number on each snowflake as you go.
- You have to get to the finish with a total of -10.
- You must follow one of the arrows each time.

START



Write down the numbers in the route here:

$$\underline{(-4)} + \underline{(-7)} + \underline{6} + \underline{(-5)} = -10$$

Extra Challenge

Find the route with the **highest** total. $\underline{(-3)} + \underline{(-1)} + \underline{5} + \underline{(-2)} = \underline{-1}$

Find the route with the **lowest** total. $\underline{(-4)} + \underline{(-7)} + \underline{2} + \underline{(-5)} = \underline{-14}$