

Name

Date



# CHRISTMAS SQUARE ADDING PUZZLE 1A

Each picture below has a value shown in the boxes below.



3



1



















0



2

Work out the total of each horizontal and vertical line of the puzzle.

= 7

= \_\_\_\_\_

= \_\_\_\_\_

= \_\_\_\_\_

= 6

= \_\_\_\_\_

= \_\_\_\_\_

= \_\_\_\_\_

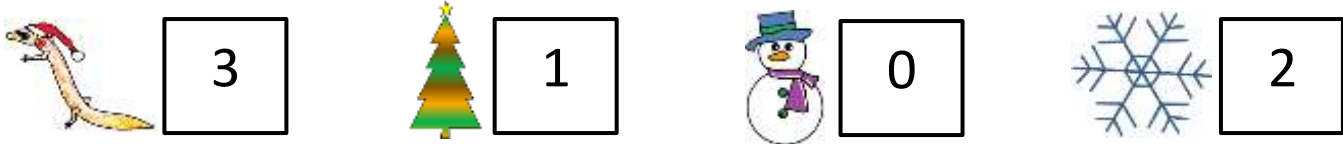
Name

Date



# CHRISTMAS SQUARE ADDING PUZZLE 1A ANSWERS

Each picture below has a value shown in the boxes below.



Work out the total of each horizontal and vertical line of the puzzle.

				= 7
				= <u>2</u>
				= <u>10</u>
				= <u>5</u>
= 6	= <u>6</u>	= <u>5</u>	= <u>7</u>	