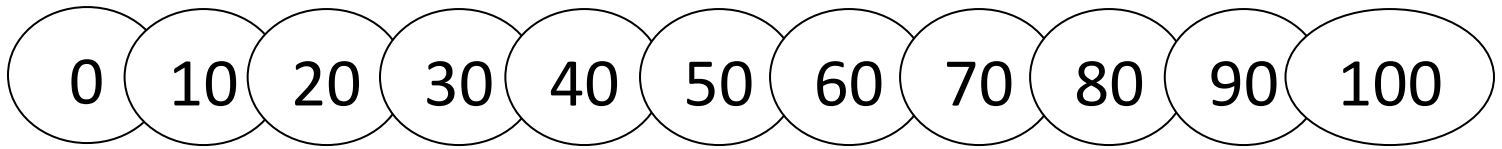


Name \_\_\_\_\_

Date \_\_\_\_\_



# SUBTRACT WITH TENS SHEET 1



1)  $20 - 10 =$  \_\_\_\_\_

11)  $30 - 20 =$  \_\_\_\_\_

2)  $50 - 10 =$  \_\_\_\_\_

12)  $50 - 20 =$  \_\_\_\_\_

3)  $30 - 10 =$  \_\_\_\_\_

13)  $80 - 20 =$  \_\_\_\_\_

4)  $80 - 10 =$  \_\_\_\_\_

14)  $60 - 20 =$  \_\_\_\_\_

5)  $40 - 10 =$  \_\_\_\_\_

15)  $40 - 20 =$  \_\_\_\_\_

6)  $10 - 10 =$  \_\_\_\_\_

16)  $100 - 20 =$  \_\_\_\_\_

7)  $100 - 10 =$  \_\_\_\_\_

17)  $20 - 20 =$  \_\_\_\_\_

8)  $90 - 10 =$  \_\_\_\_\_

18)  $50 - 30 =$  \_\_\_\_\_

9)  $70 - 10 =$  \_\_\_\_\_


19)  $80 - 30 =$  \_\_\_\_\_

10)  $60 - 10 =$  \_\_\_\_\_

20)  $60 - 40 =$  \_\_\_\_\_

What's the same and what's different?

$6 - 1 = 5$  and  $60 - 10 = 50$

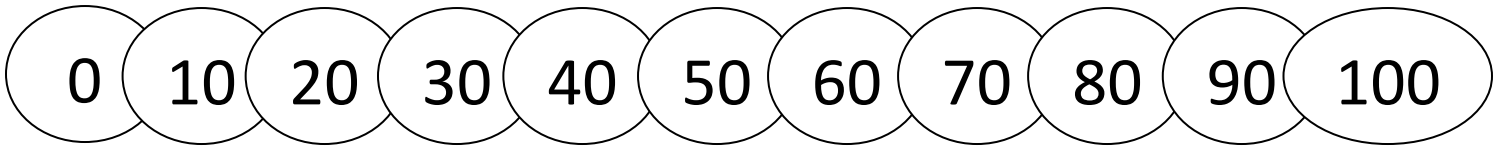


Name

Date



# SUBTRACT WITH TENS SHEET 1 ANSWERS



$$1) \quad 20 - 10 = \underline{10}$$

$$11) \quad 30 - 20 = \underline{10}$$

$$2) \quad 50 - 10 = \underline{40}$$

$$12) \quad 50 - 20 = \underline{30}$$

$$3) \quad 30 - 10 = \underline{20}$$

$$13) \quad 80 - 20 = \underline{60}$$

$$4) \quad 80 - 10 = \underline{70}$$

$$14) \quad 60 - 20 = \underline{40}$$

$$5) \quad 40 - 10 = \underline{30}$$

$$15) \quad 40 - 20 = \underline{20}$$

$$6) \quad 10 - 10 = \underline{0}$$

$$16) \quad 100 - 20 = \underline{80}$$

$$7) \quad 100 - 10 = \underline{90}$$

$$17) \quad 20 - 20 = \underline{0}$$

$$8) \quad 90 - 10 = \underline{80}$$

$$18) \quad 50 - 30 = \underline{20}$$

$$9) \quad 70 - 10 = \underline{60}$$

$$19) \quad 80 - 30 = \underline{50}$$

$$10) \quad 60 - 10 = \underline{50}$$

$$20) \quad 60 - 40 = \underline{20}$$

What's the same and what's different?

$6 - 1 = 5$  and  $60 - 10 = 50$