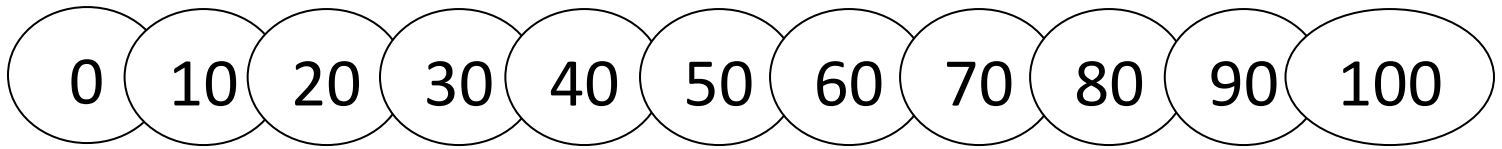


Name _____

Date _____



SUBTRACT WITH TENS SHEET 2



1) $20 - 10 =$ _____

11) $100 - 40 =$ _____

2) $60 - 20 =$ _____

12) $60 - 60 =$ _____

3) $40 - 10 =$ _____

13) $50 - 40 =$ _____

4) $90 - 20 =$ _____

14) $70 - 30 =$ _____

5) $50 - 30 =$ _____

15) $90 - 50 =$ _____

6) $100 - 20 =$ _____

16) $60 - 30 =$ _____

7) $70 - 40 =$ _____

17) $40 - 40 =$ _____

8) $40 - 40 =$ _____

18) $100 - 50 =$ _____

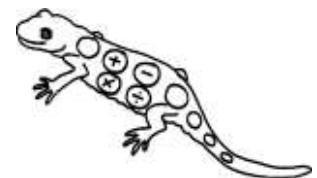
9) $30 - 20 =$ _____

19) $80 - 60 =$ _____

10) $80 - 20 =$ _____

20) $90 - 70 =$ _____

What happens when you subtract the same number from itself? Example: $60 - 60$

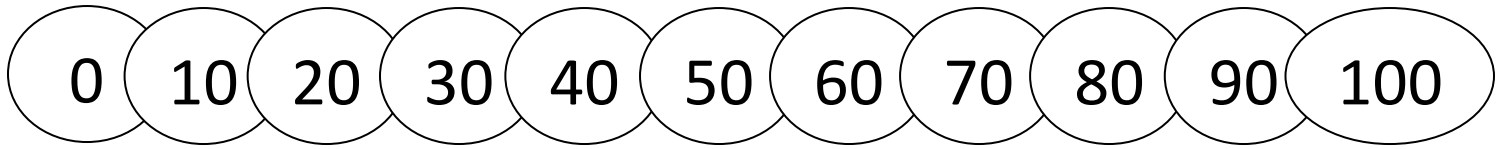


Name _____

Date _____



SUBTRACT WITH TENS SHEET 2 ANSWERS



$$1) \quad 20 - 10 = \underline{10}$$

$$11) \quad 100 - 40 = \underline{60}$$

$$2) \quad 60 - 20 = \underline{40}$$

$$12) \quad 60 - 60 = \underline{0}$$

$$3) \quad 40 - 10 = \underline{30}$$

$$13) \quad 50 - 40 = \underline{10}$$

$$4) \quad 90 - 20 = \underline{70}$$

$$14) \quad 70 - 30 = \underline{40}$$

$$5) \quad 50 - 30 = \underline{20}$$

$$15) \quad 90 - 50 = \underline{40}$$

$$6) \quad 100 - 20 = \underline{80}$$

$$16) \quad 60 - 30 = \underline{30}$$

$$7) \quad 70 - 40 = \underline{30}$$

$$17) \quad 40 - 40 = \underline{0}$$

$$8) \quad 40 - 40 = \underline{0}$$

$$18) \quad 100 - 50 = \underline{50}$$

$$9) \quad 30 - 20 = \underline{10}$$

$$19) \quad 80 - 60 = \underline{20}$$

$$10) \quad 80 - 20 = \underline{60}$$

$$20) \quad 90 - 70 = \underline{20}$$

What happens when you subtract the same number from itself? Example: $60 - 60$

You always get 0!

