

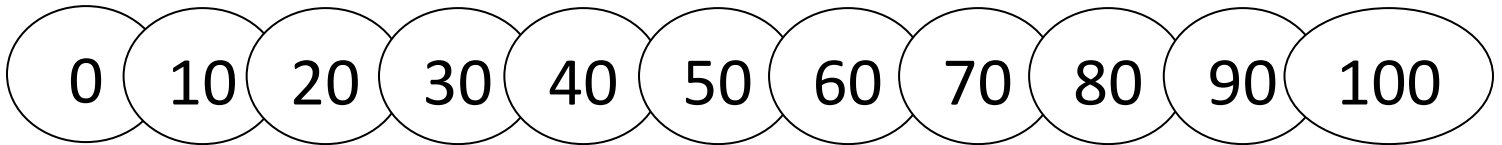
Name \_\_\_\_\_

Date \_\_\_\_\_



## SUBTRACT WITH TENS SHEET 6

Choose two of these numbers each time.



1) Use the numbers to make 20 in 2 different ways:

a) \_\_\_\_\_ - \_\_\_\_\_ = 10

b) \_\_\_\_\_ - \_\_\_\_\_ = 10


2) Use the numbers to make 30 in 2 different ways:

a) \_\_\_\_\_ - \_\_\_\_\_ = 20

b) \_\_\_\_\_ - \_\_\_\_\_ = 20


3) What is the largest answer you can make:

\_\_\_\_\_ - \_\_\_\_\_ = \_\_\_\_\_



4) What is the smallest answer you can make:

\_\_\_\_\_ - \_\_\_\_\_ = \_\_\_\_\_



5) Newton says that  $90 - 50$  is the same as  $50 - 90$ .

Is he right? \_\_\_\_\_

6) Which has the bigger answer:  $80 - 40$  or  $80 - 50$ ? \_\_\_\_\_

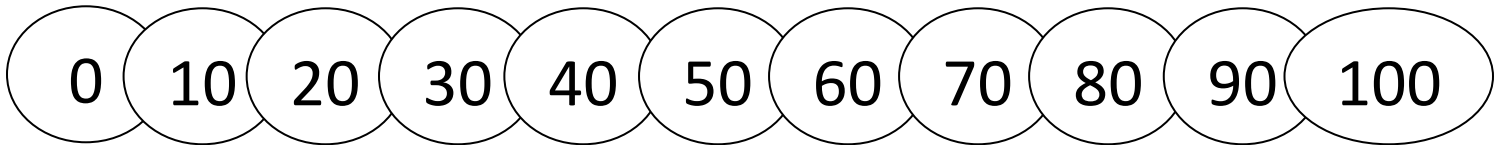
7) Captain has 90 sweets. He eats 40 of them. How many does he have left? Write the number sentence \_\_\_\_\_



# SUBTRACT WITH TENS SHEET 6 ANSWERS

There are several answers for questions 1, 2 and 4.

We have given some examples of possible answers.



1) Use the numbers to make 20 in 2 different ways:


a)  $\underline{20} - \underline{10} = 10$       b)  $\underline{40} - \underline{30} = 10$

2) Use the numbers to make 30 in 2 different ways:

a)  $\underline{30} - \underline{10} = 20$       b)  $\underline{50} - \underline{30} = 20$

3) What is the largest answer you can make:

$\underline{100} - \underline{0} = \underline{100}$



4) What is the smallest answer you can make:

$\underline{50} - \underline{50} = \underline{0}$  (if we ignore negative answers)

5) Newton says that  $90 - 50$  is the same as  $50 - 90$ .

Is he right? No, they are not the same.

6) Which has the bigger answer:  $80 - 40$  or  $80 - 50$ ?  $80 - 40$

7) Captain has 90 sweets. He eats 40 of them. How many does he have

left? Write the number sentence  $90 - 40 = 50$