

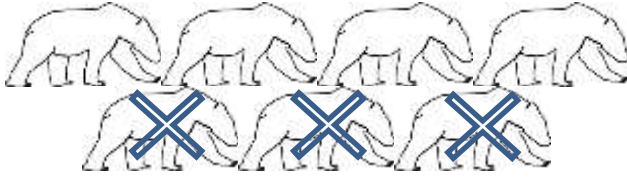
Name

Date



ANIMAL SUBTRACTION TO 10 SHEET 1A


Cross out the animals to help you work out these subtractions.



$$7 - 3 = \square$$



$$5 - 2 = \square$$



$$6 - 1 = \square$$



$$7 - 5 = \square$$




$$6 - 3 = \square$$

Name

Date




ANIMAL SUBTRACTION TO 10 SHEET 1A ANSWERS



$$7 - 3 = \boxed{4}$$



$$5 - 2 = \boxed{3}$$



$$6 - 1 = \boxed{5}$$



$$7 - 5 = \boxed{2}$$



$$6 - 3 = \boxed{3}$$