


Name

Date

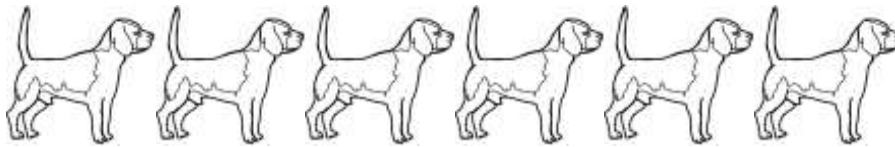


ANIMAL SUBTRACTION TO 10 SHEET 2B


Cross out the animals to help you work out these subtractions.




$$\begin{array}{r} 8 \\ - 2 \\ \hline \end{array}$$




$$\begin{array}{r} 6 \\ - 5 \\ \hline \end{array}$$



$$\begin{array}{r} 7 \\ - 4 \\ \hline \end{array}$$



$$\begin{array}{r} 8 \\ - 3 \\ \hline \end{array}$$



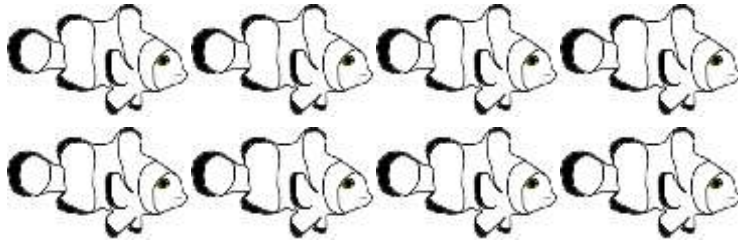
$$\begin{array}{r} 10 \\ - 2 \\ \hline \end{array}$$

Name


Date




ANIMAL SUBTRACTION TO 10 SHEET 2B ANSWERS




$$\begin{array}{r} 8 \\ - 2 \\ \hline 6 \end{array}$$




$$\begin{array}{r} 6 \\ - 5 \\ \hline 1 \end{array}$$



$$\begin{array}{r} 7 \\ - 4 \\ \hline 3 \end{array}$$



$$\begin{array}{r} 8 \\ - 3 \\ \hline 5 \end{array}$$



$$\begin{array}{r} 10 \\ - 2 \\ \hline 8 \end{array}$$