

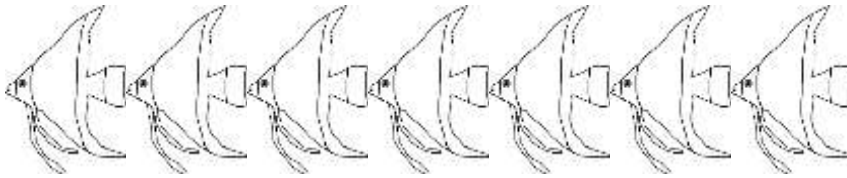
Name

Date

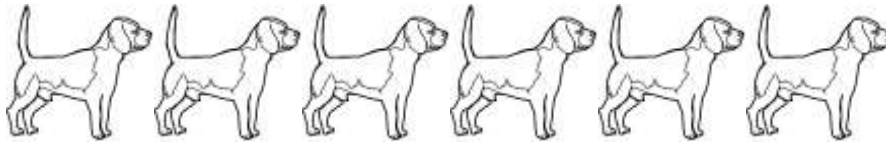


ANIMAL SUBTRACTION TO 10 SHEET 3A


Cross out the animals to help you work out these subtractions.




$$7 - 5 = \square$$



$$6 - 6 = \square$$



$$8 - 4 = \square$$



$$9 - 3 = \square$$



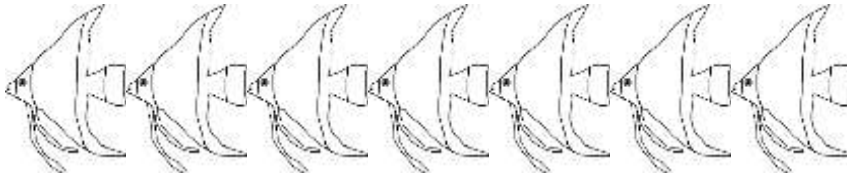
$$10 - 5 = \square$$

Name

Date

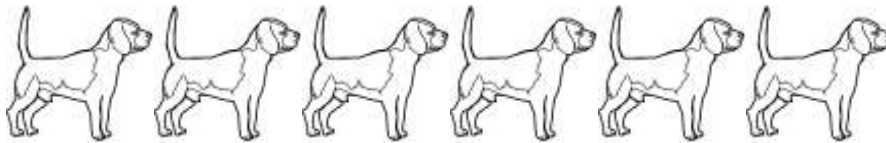


ANIMAL SUBTRACTION TO 10 SHEET 3A ANSWERS




$7 - 5 =$

2




$6 - 6 =$

0



$8 - 4 =$

4



$9 - 3 =$

6



$10 - 5 =$

5