

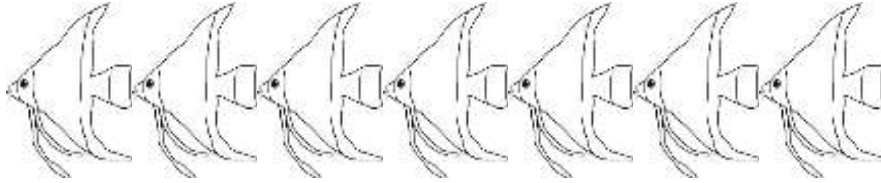
Name

Date




## ANIMAL SUBTRACTION TO 10 SHEET 5A

*Cross out the animals to help you work out these subtractions.*



$$7 - 3 = \square$$




$$9 - 7 = \square$$



$$10 - 9 = \square$$



$$8 - 5 = \square$$



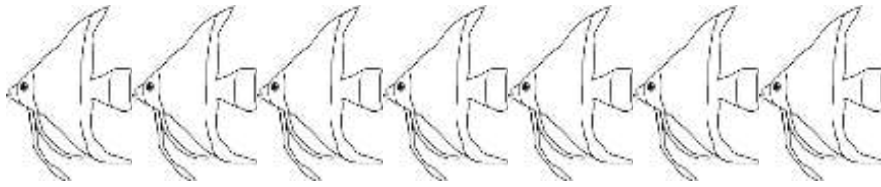
$$10 - 6 = \square$$

Name


Date



# ANIMAL SUBTRACTION TO 10 SHEET 5A ANSWERS



$$7 - 3 = \boxed{4}$$



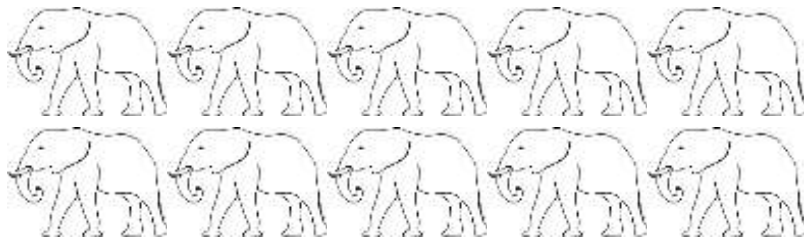
$$9 - 7 = \boxed{2}$$



$$10 - 9 = \boxed{1}$$



$$8 - 5 = \boxed{3}$$



$$10 - 6 = \boxed{4}$$