

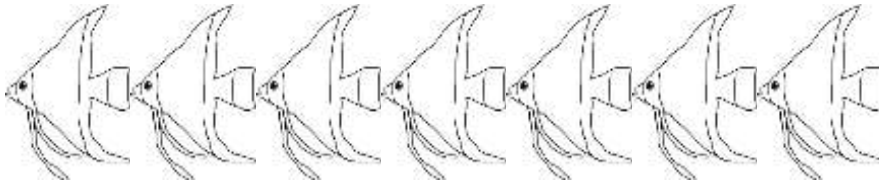
Name

Date




ANIMAL SUBTRACTION TO 10 SHEET 5B

Cross out the animals to help you work out these subtractions.



$$\begin{array}{r} 7 \\ - 3 \\ \hline \end{array}$$




$$\begin{array}{r} 9 \\ - 7 \\ \hline \end{array}$$



$$\begin{array}{r} 10 \\ - 9 \\ \hline \end{array}$$



$$\begin{array}{r} 8 \\ - 5 \\ \hline \end{array}$$



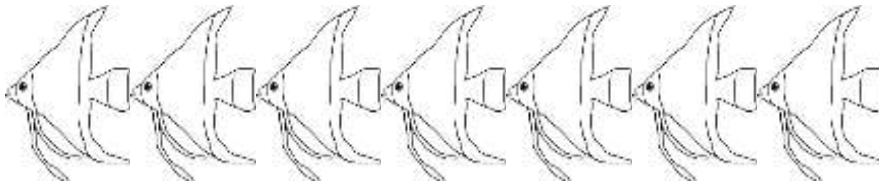
$$\begin{array}{r} 10 \\ - 6 \\ \hline \end{array}$$

Name


Date



ANIMAL SUBTRACTION TO 10 SHEET 5B ANSWERS



$$\begin{array}{r} 7 \\ - 3 \\ \hline 4 \end{array}$$




$$\begin{array}{r} 9 \\ - 7 \\ \hline 2 \end{array}$$



$$\begin{array}{r} 10 \\ - 9 \\ \hline 1 \end{array}$$



$$\begin{array}{r} 8 \\ - 5 \\ \hline 3 \end{array}$$



$$\begin{array}{r} 10 \\ - 6 \\ \hline 4 \end{array}$$