

Name

Date



ANIMAL SUBTRACTION TO 5 SHEET 1


Cross out the animals to help you work out these subtractions.



$$4 - 3 = \square$$



$$3 - 2 = \square$$



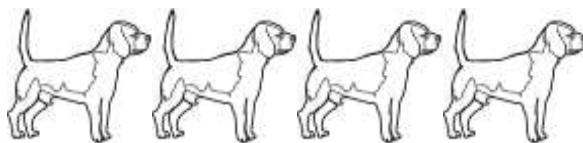
$$5 - 1 = \square$$



$$4 - 2 = \square$$



$$5 - 3 = \square$$



$$4 - 4 = \square$$




$$5 - 2 = \square$$


Name


Date





ANIMAL SUBTRACTION TO 5 SHEET 1 ANSWERS

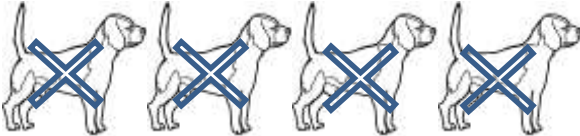
 $4 - 3 =$ 1


 $3 - 2 =$ 1

 $5 - 1 =$ 4

 $4 - 2 =$ 2

 $5 - 3 =$ 2

 $4 - 4 =$ 0

 $5 - 2 =$ 3