

Name

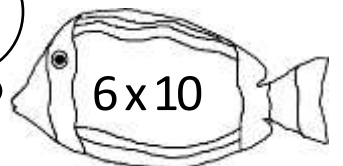
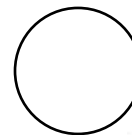
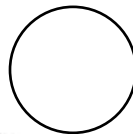
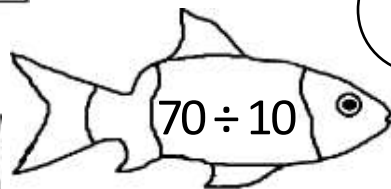
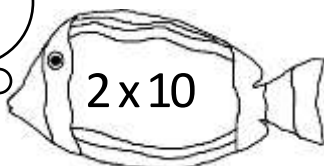

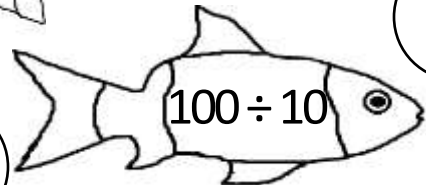

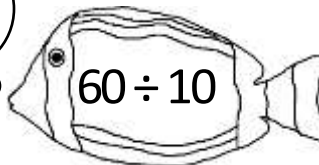
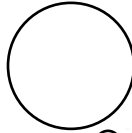
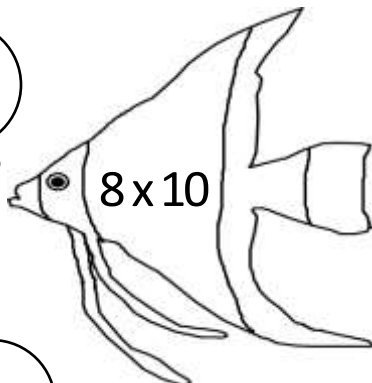

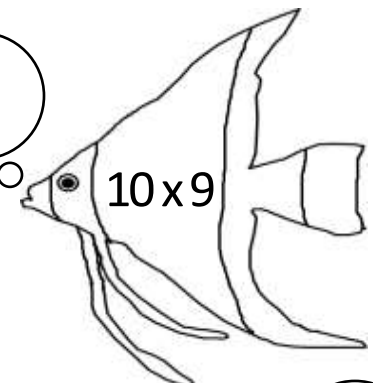
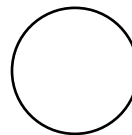
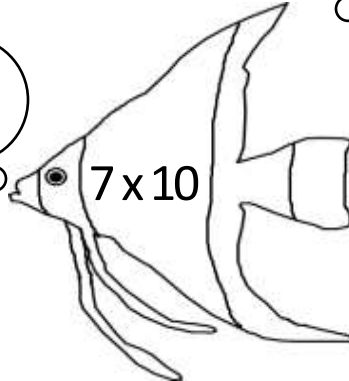

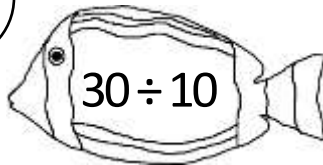

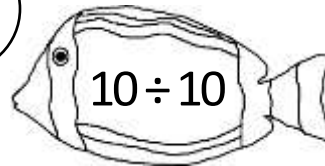
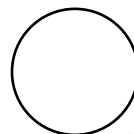

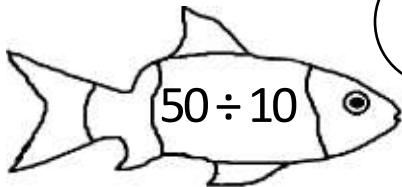
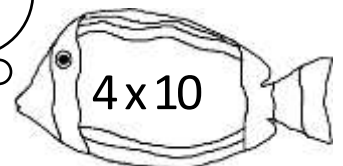

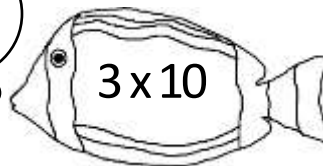


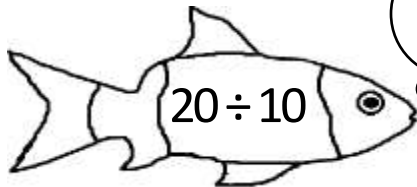
Date



10 TIMES TABLE - FISH SHEET 2 (x and ÷)

Write the answers to these multiplication and division facts in the bubbles.

Can you find 3 bubbles that add up to 95?



Name

Date



10 TIMES TABLE - FISH SHEET 2 ANSWERS

Write the answers to these multiplication and division facts in the bubbles.

Can you find 3 bubbles that add up to 95? $80+10+5$; $70+20+5$; $60+30+5$

20 ÷ 10 2 30 3 x 10 40 4 x 10

50 ÷ 10 5 1 10 ÷ 10

3 30 ÷ 10 70 7 x 10 90 10 x 9

80 8 x 10 6 60 ÷ 10 10

20 2 x 10 70 ÷ 10 7 60 6 x 10