

Name

Date



11 TIMES TABLE - FROG SHEET 1

Write in the answers to these multiplication facts in the bubbles.

Can you find pairs bubbles with a difference of 66?

$11 \times 4 =$

$3 \times 11 =$

$12 \times 11 =$

$5 \times 11 =$

$11 \times 2 =$

$6 \times 11 =$

$9 \times 11 =$

$11 \times 7 =$

$1 \times 11 =$

$10 \times 11 =$

$11 \times 8 =$

$11 \times 11 =$



Name

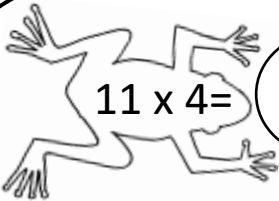
Date



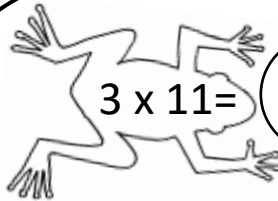
11 TIMES TABLE - FROG SHEET 1 ANSWERS

Write in the answers to these multiplication facts in the bubbles.

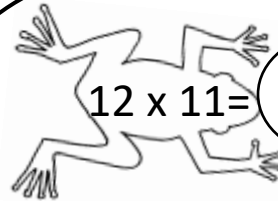
Can you find pairs bubbles with a difference of 66? *132&66; 121&55; 110&44; 99&33; 88&22; 77&11*



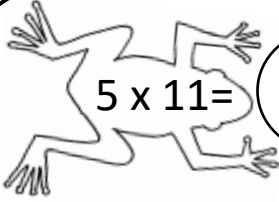
$11 \times 4 =$ **44**



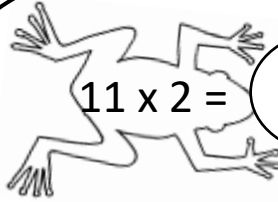
$3 \times 11 =$ **33**



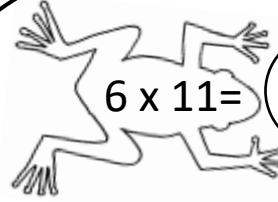
$12 \times 11 =$ **132**



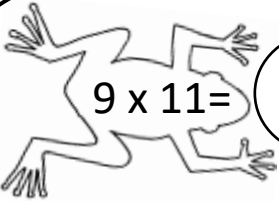
$5 \times 11 =$ **55**



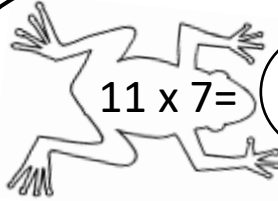
$11 \times 2 =$ **22**



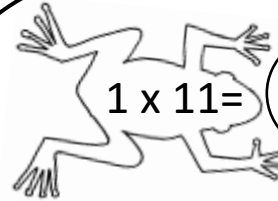
$6 \times 11 =$ **66**



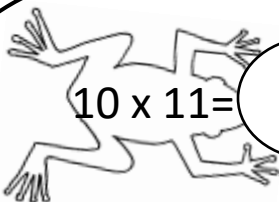
$9 \times 11 =$ **99**



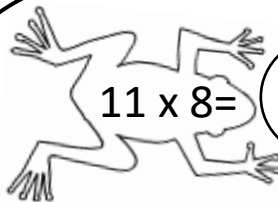
$11 \times 7 =$ **77**




$1 \times 11 =$ **11**



$10 \times 11 =$ **110**



$11 \times 8 =$ **88**



$11 \times 11 =$ **121**

