

Name

Date



12 TIMES TABLE - FROG SHEET 1

Write in the answers to these multiplication facts in the bubbles.

Can you find pairs bubbles with a difference of 60?

$12 \times 4 =$

$7 \times 12 =$

$2 \times 12 =$

$5 \times 12 =$

$12 \times 10 =$

$6 \times 12 =$

$9 \times 12 =$


$12 \times 11 =$

$1 \times 12 =$

$3 \times 12 =$

$12 \times 8 =$

$12 \times 12 =$



Name

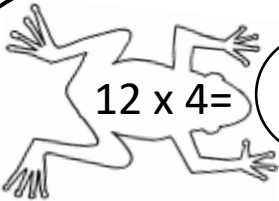
Date



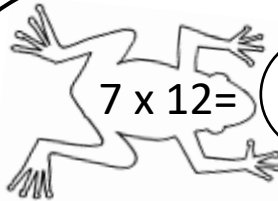
12 TIMES TABLE - FROG SHEET 1 ANSWERS

Write in the answers to these multiplication facts in the bubbles.

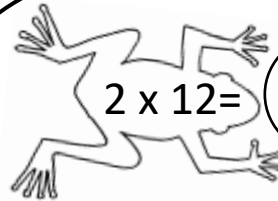
Can you find pairs bubbles with a difference of 60? **144&84; 132&72; 120&60; 108&48; 96&36; 84&24; 72&12**



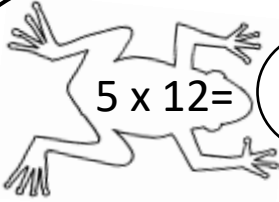
$12 \times 4 =$ **48**



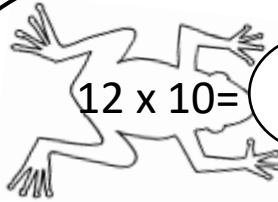
$7 \times 12 =$ **84**



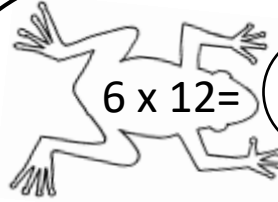
$2 \times 12 =$ **24**



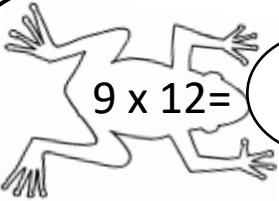
$5 \times 12 =$ **60**



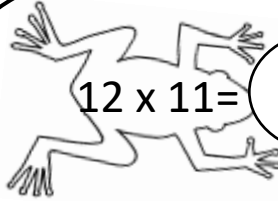
$12 \times 10 =$ **120**



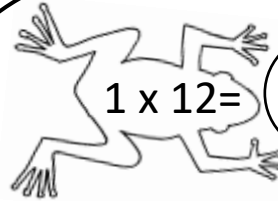
$6 \times 12 =$ **72**




$9 \times 12 =$ **108**



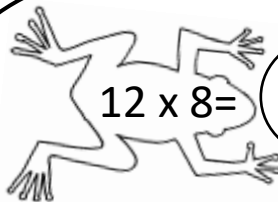
$12 \times 11 =$ **132**




$1 \times 12 =$ **12**



$3 \times 12 =$ **36**



$12 \times 8 =$ **96**



$12 \times 12 =$ **144**

