

Name

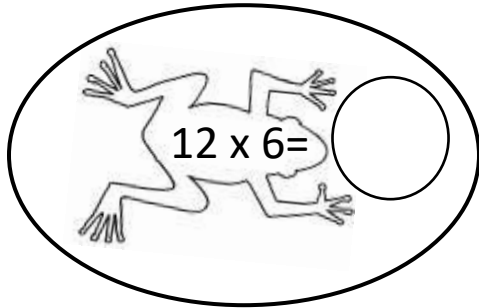
Date



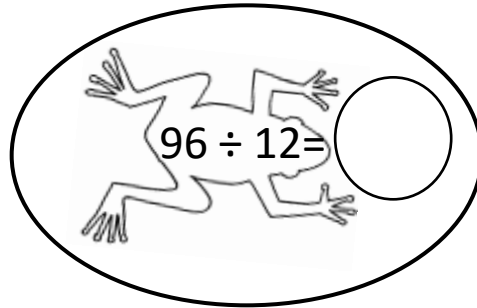
12 TIMES TABLE - FROG SHEET 2 (x and ÷)

Write in the answers to these multiplication and division facts in the bubbles.

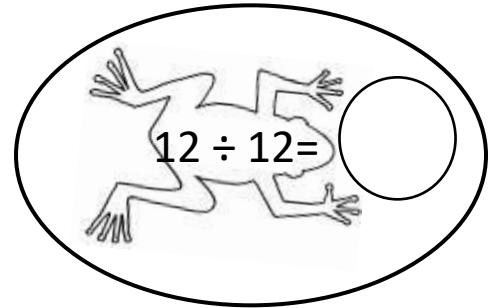
Shade the lily pads with answers less than 60 yellow, and 60 or more green.



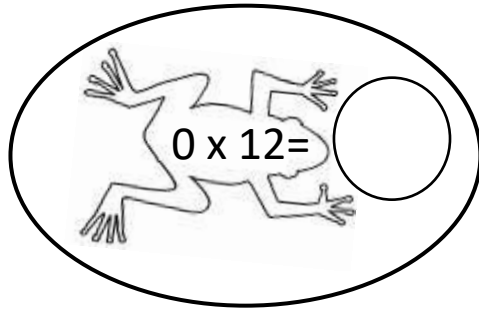
$12 \times 6 =$



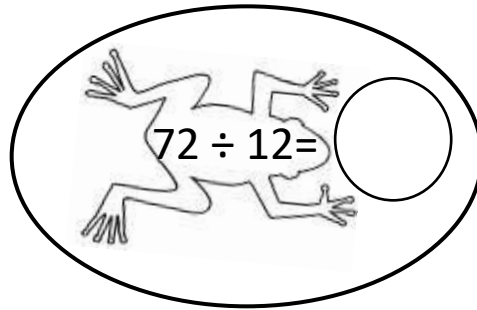
$96 \div 12 =$



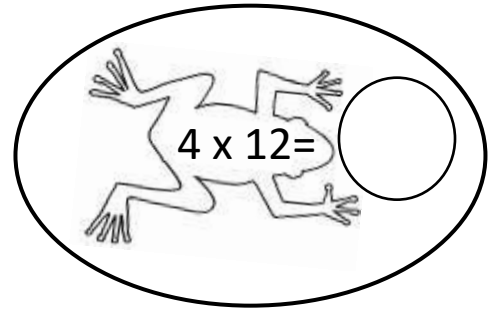
$12 \div 12 =$



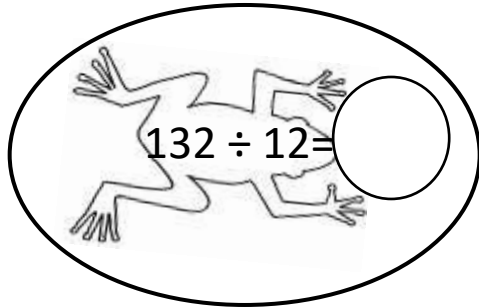
$0 \times 12 =$



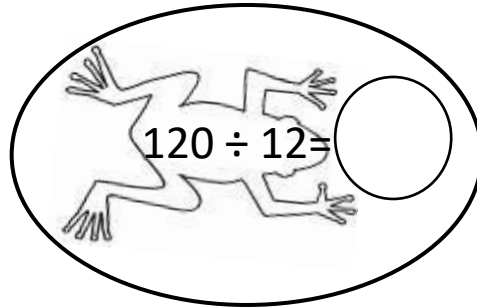
$72 \div 12 =$



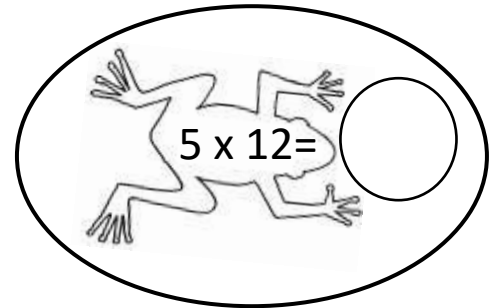
$4 \times 12 =$



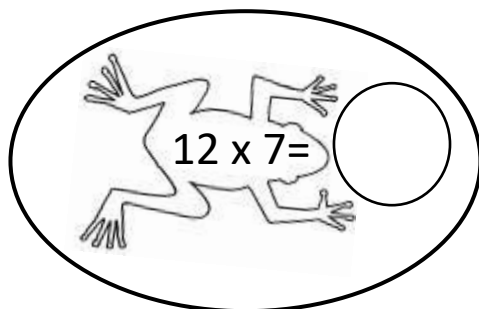
$132 \div 12 =$



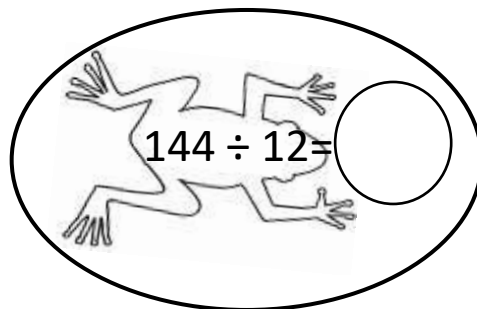
$120 \div 12 =$



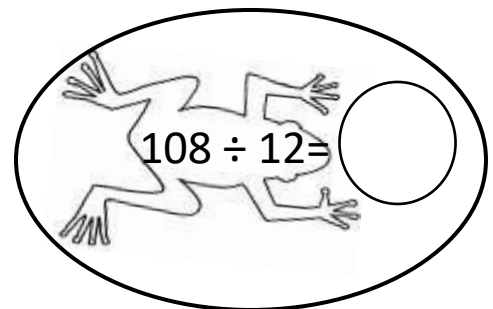
$5 \times 12 =$



$12 \times 7 =$



$144 \div 12 =$



$108 \div 12 =$



Name

Date



12 TIMES TABLE - FROG SHEET 2 ANSWERS

Write in the answers to these multiplication and division facts in the bubbles.

Shade the lily pads with answers less than 60 yellow, and 60 or more green.

$12 \times 6 =$ **72**

$96 \div 12 =$ **8**

$12 \div 12 =$ **1**

$0 \times 12 =$ **0**

$72 \div 12 =$ **6**

$4 \times 12 =$ **48**

$132 \div 12 =$ **11**

$120 \div 12 =$ **10**

$5 \times 12 =$ **60**

$12 \times 7 =$ **84**

$144 \div 12 =$ **12**

$108 \div 12 =$ **9**

