




Name

Date



# 12 TIMES TABLE - SALAMANDER SHEET 1

Write in the answers to each fact in Sally Salamander's ball.



Newton the Number Newt says "Shade the odd answers in green and the even answers in blue. What do you notice?"



Name

Date



# 12 TIMES TABLE - SALAMANDER SHEET 1 ANSWERS

Write in the answers to each fact in Sally Salamander's ball.

<p>36</p> $12 \times 3 =$	<p>48</p> $12 \times 4 =$	<p>24</p> $12 \times 2 =$
<p>60</p> $12 \times 5 =$	<p>120</p> $12 \times 10 =$	<p>84</p> $12 \times 7 =$
<p>144</p> $12 \times 12 =$	<p>132</p> $12 \times 11 =$	<p>96</p> $12 \times 8 =$

Newton the Number Newt says "Shade the odd answers in green and the even answers in blue. What do you notice?"

There are no odd answers!

