

Name

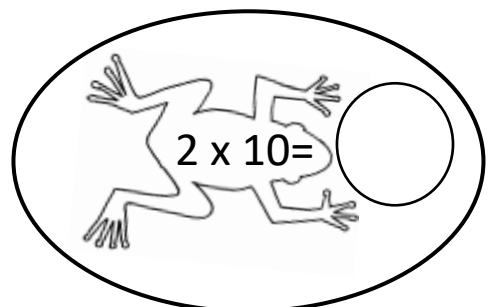
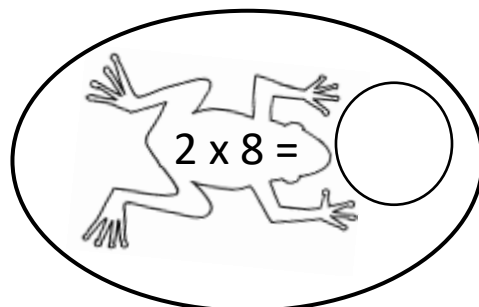
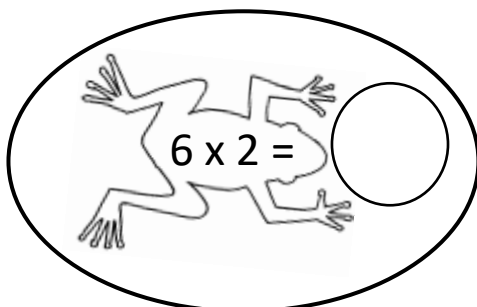
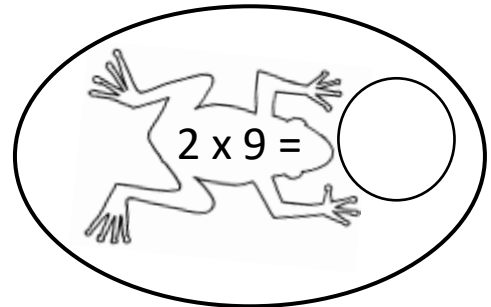
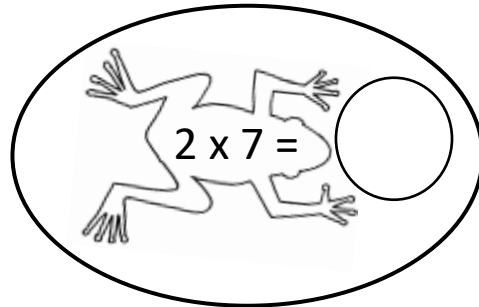
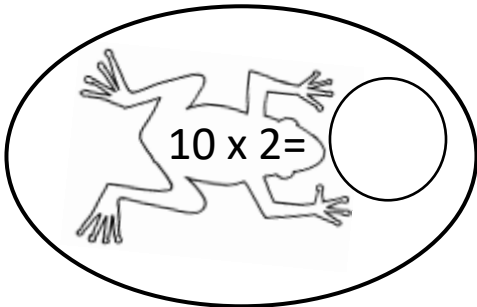
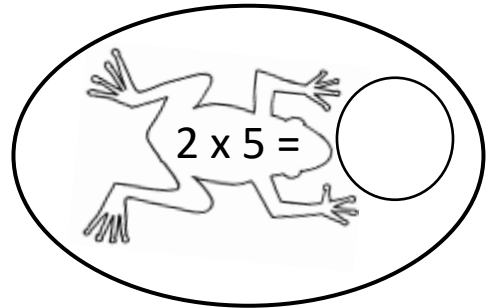
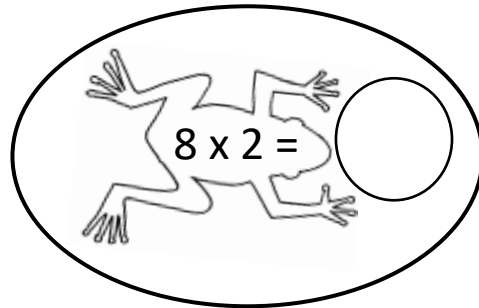
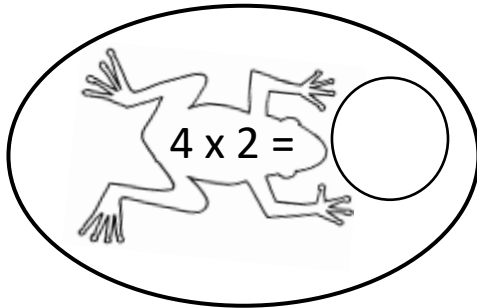
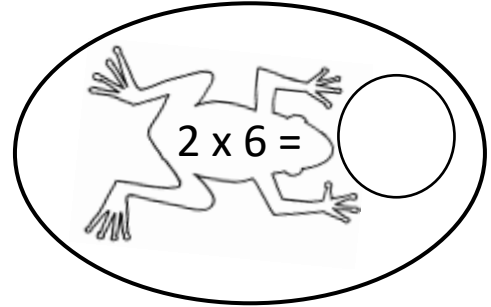
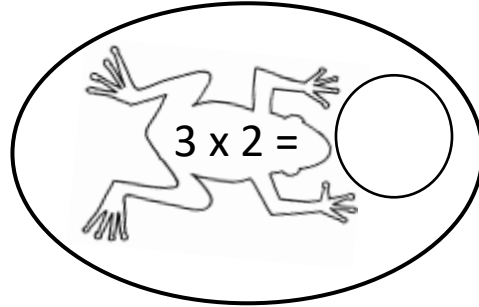
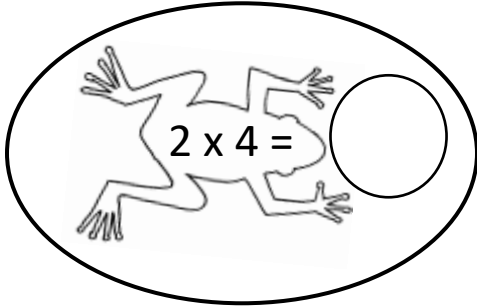
Date



# TIMES TABLE - FROG SHEET 1

Write in the answers to these multiplication facts in the bubbles.

Shade the frogs with answers 12 or less yellow.



Name

Date



# TIMES TABLE - FROG SHEET 1 ANSWERS

Write in the answers to these multiplication facts in the bubbles.

Shade the frogs with answers 12 or less yellow.

$2 \times 4 =$  8

$3 \times 2 =$  6

$2 \times 6 =$  12

$4 \times 2 =$  8

$8 \times 2 =$  16

$2 \times 5 =$  10

$10 \times 2 =$  20

$2 \times 7 =$  14

$2 \times 9 =$  18

$6 \times 2 =$  12

$2 \times 8 =$  16

$2 \times 10 =$  20