

Name

Date



# 2

## TIMES TABLE - SALAMANDER SHEET 2 (x and ÷)

Write in the answers to each multiplication and division fact in Sally the Shape Salamander's ball.



Newton the Number Newt says "Can you find two balls with a total of 24?"



Name






Date



# 2

## TIMES TABLE - SALAMANDER SHEET 2 ANSWERS

Write in the answers to each multiplication and division fact in Sally the Shape Salamander's ball.



Newton the Number Newt says "Can you find two balls with a total of 24?" 20 + 4; 18 + 6; 16 + 8; 14 + 10

