

Name

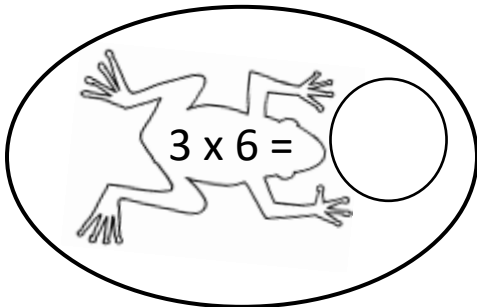
Date



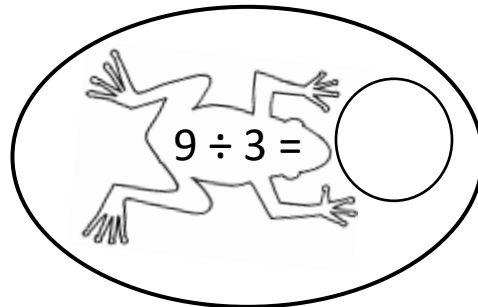
3 TIMES TABLE - FROG SHEET 2 (x and ÷)

Write in the answers to these multiplication and division facts in the bubbles.

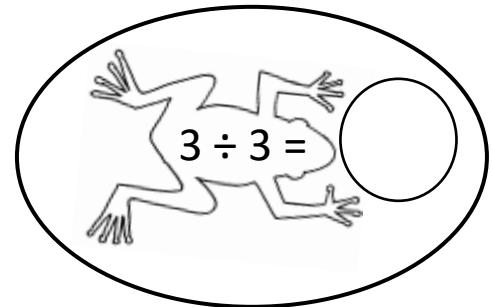
Shade the lily pads with answers less than 15 yellow, and 15 or more green.



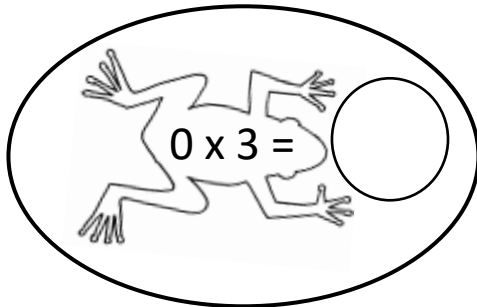
$3 \times 6 =$



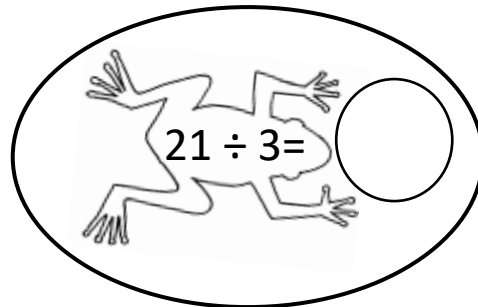
$9 \div 3 =$



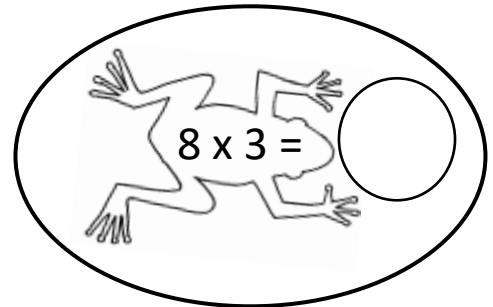
$3 \div 3 =$



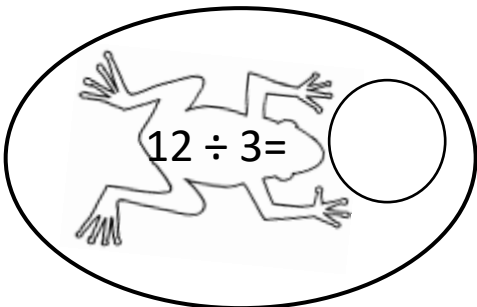
$0 \times 3 =$



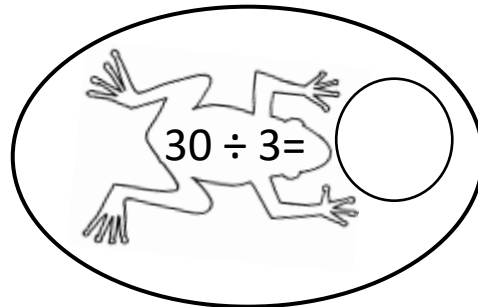
$21 \div 3 =$



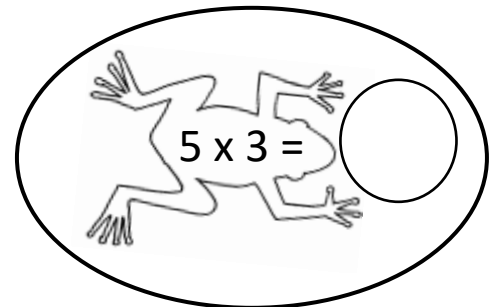
$8 \times 3 =$



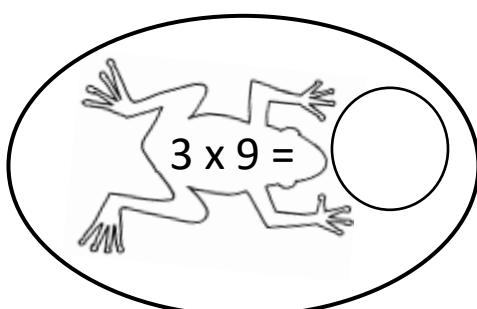
$12 \div 3 =$



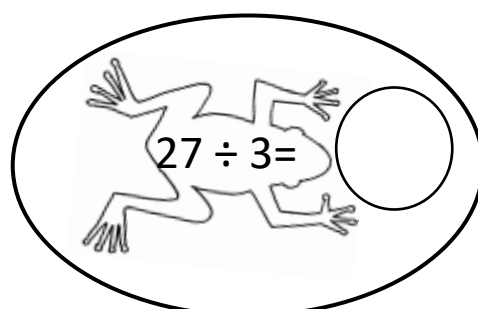
$30 \div 3 =$



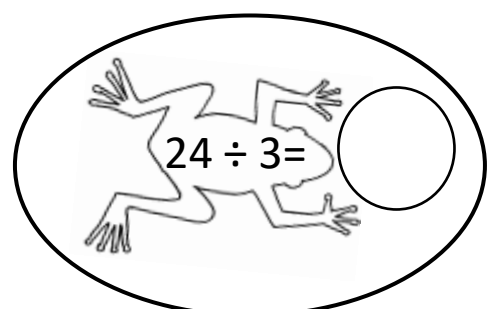
$5 \times 3 =$



$3 \times 9 =$



$27 \div 3 =$



$24 \div 3 =$



Name

Date



3 TIMES TABLE - FROG SHEET 2 ANSWERS

Write in the answers to these multiplication and division facts in the bubbles.

Shade the lily pads with answers less than 15 yellow, and 15 or more green.

$3 \times 6 =$ 18

$9 \div 3 =$ 3

$3 \div 3 =$ 1

$0 \times 3 =$ 0

$21 \div 3 =$ 7

$8 \times 3 =$ 24

$12 \div 3 =$ 4

$30 \div 3 =$ 10

$5 \times 3 =$ 15

$3 \times 9 =$ 27

$27 \div 3 =$ 9

$24 \div 3 =$ 8

