




Name

Date



3 TIMES TABLE - SALAMANDER SHEET 2 (x and ÷)

Write in the answers to each multiplication or division fact in Sally the Shape Salamander's ball.



Shade the odd answers green and the even answers yellow.



Name

Date



3 TIMES TABLE - SALAMANDER SHEET 2 ANSWERS

Write in the answers to each multiplication or division fact in Sally the Shape Salamander's ball.

<p>$6 \div 3 =$ <u>2</u></p>	<p>$3 \times 1 =$ <u>3</u></p>	<p>$12 \div 3 =$ <u>4</u></p>
<p>$4 \times 3 =$ <u>12</u></p>	<p>$8 \times 3 =$ <u>24</u></p>	<p>$18 \div 3 =$ <u>6</u></p>
<p>$3 \times 7 =$ <u>21</u></p>	<p>$30 \div 3 =$ <u>10</u></p>	<p>$9 \times 3 =$ <u>27</u></p>

Shade the odd answers green and the even answers yellow.

