

Name _____

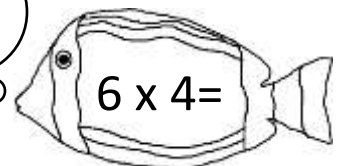

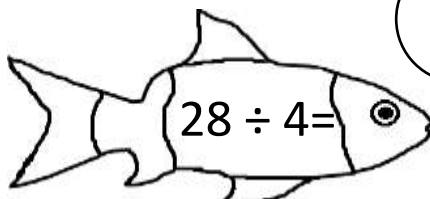
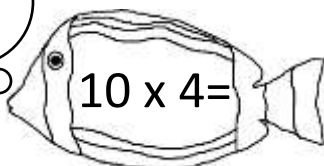


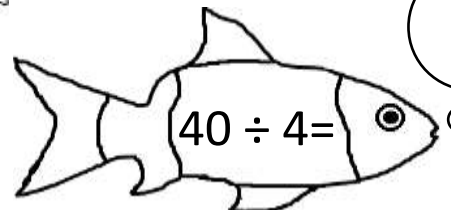
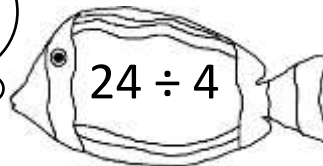

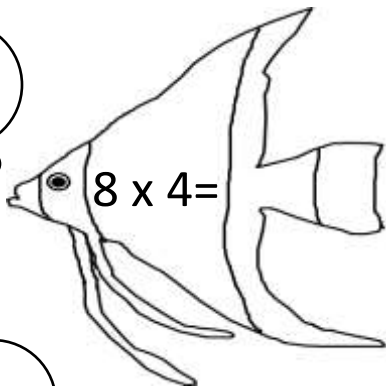
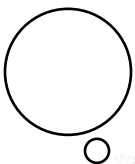
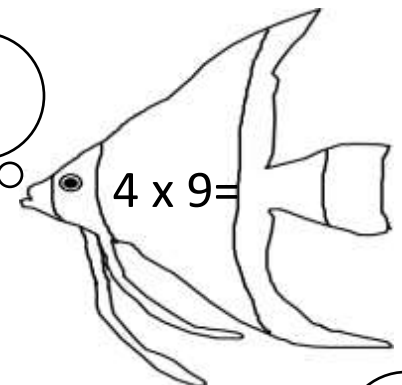

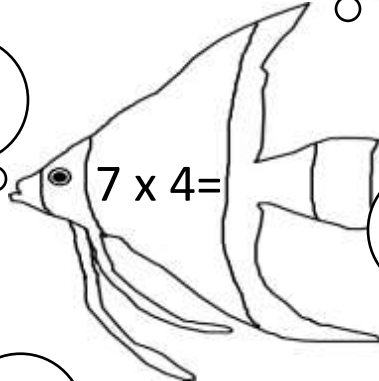

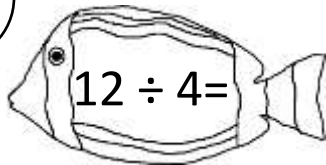
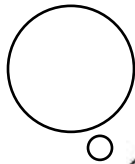
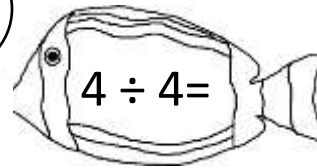
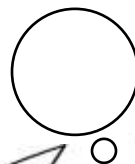

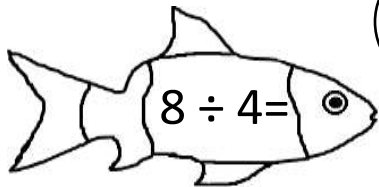
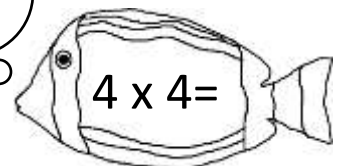

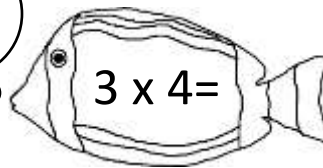


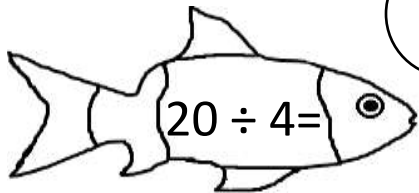
Date _____



4 TIMES TABLE - FISH SHEET 2 (x and ÷)

Write the answers to these multiplication and division facts in the bubbles.

Can you find 3 bubbles that add up to 50?



Name

Date



4 TIMES TABLE - FISH SHEET 2 ANSWERS

Write the answers to these multiplication and division facts in the bubbles.

Can you find 3 bubbles that add up to 50?

36+12+2; 40+7+3; 24+16+10; 28+12+10; 32+16+2; 28+16+6;...

5

12

16

$20 \div 4 =$

$3 \times 4 =$

$4 \times 4 =$

2

1

$8 \div 4 =$

$4 \div 4 =$

28

$7 \times 4 =$

36

3

$12 \div 4 =$

$4 \times 9 =$

32

6

$8 \times 4 =$

$24 \div 4 =$

40

10

$10 \times 4 =$

$40 \div 4 =$

7

24

$28 \div 4 =$

$6 \times 4 =$