

Name

Date



4 TIMES TABLE - FROG SHEET 2 (x and ÷)

Write in the answers to these multiplication and division facts in the bubbles.

Shade the lily pads with answers between 8 and 16 orange.

Shade the lily pads with answers between 25 and 31 yellow.

$4 \times 6 =$

$12 \div 4 =$

$0 \div 4 =$

$3 \times 4 =$

$28 \div 4 =$

$8 \times 4 =$

$16 \div 4 =$

$40 \div 4 =$

$5 \times 4 =$

$4 \times 9 =$

$36 \div 4 =$

$24 \div 4 =$



Name

Date

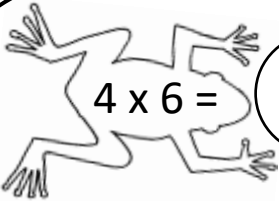


4 TIMES TABLE - FROG SHEET 2 ANSWERS

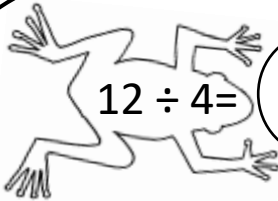
Write in the answers to these multiplication and division facts in the bubbles.

Shade the lily pads with answers between 8 and 16 orange.

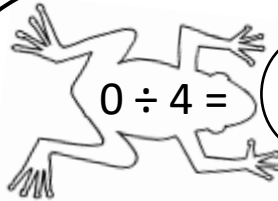
Shade the lily pads with answers between 25 and 31 yellow.



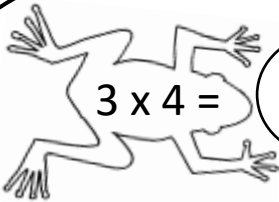
$4 \times 6 =$ **24**



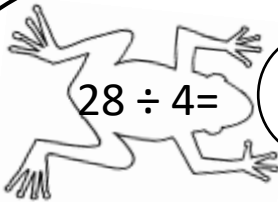
$12 \div 4 =$ **3**



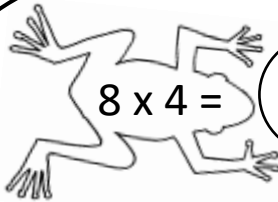
$0 \div 4 =$ **0**



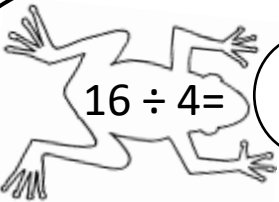
$3 \times 4 =$ **12**



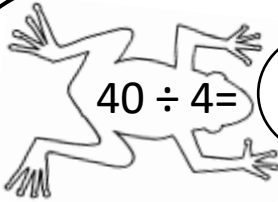
$28 \div 4 =$ **7**



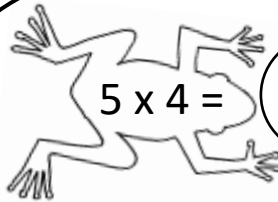
$8 \times 4 =$ **32**



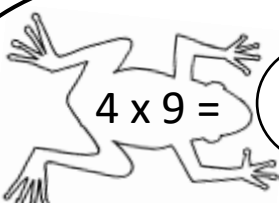
$16 \div 4 =$ **4**



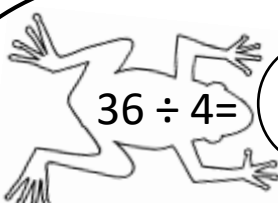
$40 \div 4 =$ **10**



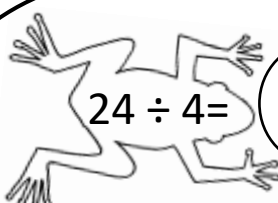
$5 \times 4 =$ **20**



$4 \times 9 =$ **36**



$36 \div 4 =$ **9**



$24 \div 4 =$ **6**