

Name

Date



5 TIMES TABLE - FROG SHEET 2 (x and ÷)

Write in the answers to these multiplication and division facts in the bubbles.

Shade the lily pads with odd answers orange and even answers yellow.

$5 \times 6 =$

$20 \div 5 =$

$10 \div 5 =$

$3 \times 5 =$

$0 \div 5 =$

$8 \times 5 =$

$5 \div 5 =$

$50 \div 5 =$

$5 \times 4 =$

$5 \times 9 =$

$35 \div 5 =$

$25 \div 5 =$



Name

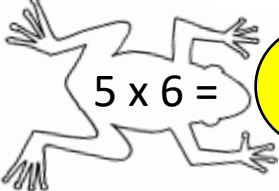
Date



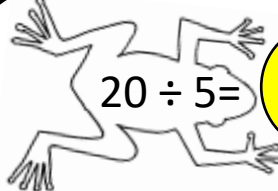
5 TIMES TABLE - FROG SHEET 2 ANSWERS

Write in the answers to these multiplication and division facts in the bubbles.

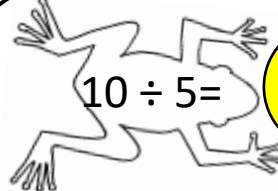
Shade the lily pads with odd answers orange and even answers yellow.



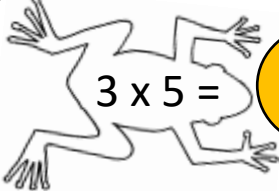
$5 \times 6 =$ **30**



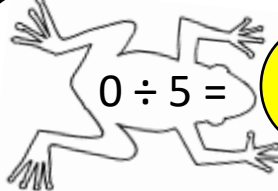
$20 \div 5 =$ **4**



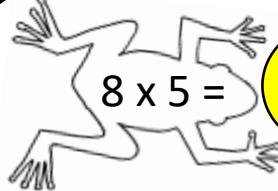
$10 \div 5 =$ **2**



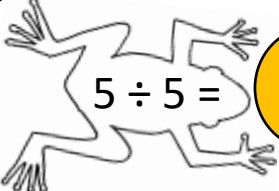
$3 \times 5 =$ **15**



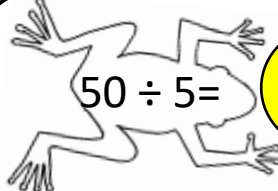
$0 \div 5 =$ **0**



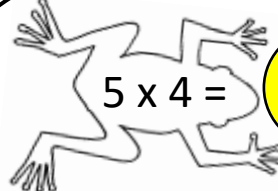
$8 \times 5 =$ **40**



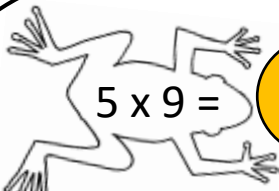
$5 \div 5 =$ **1**



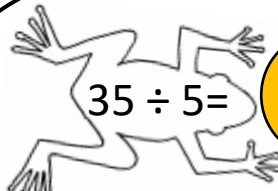
$50 \div 5 =$ **10**



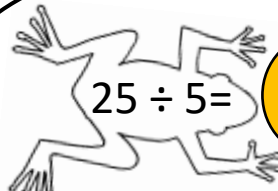
$5 \times 4 =$ **20**



$5 \times 9 =$ **45**



$35 \div 5 =$ **7**



$25 \div 5 =$ **5**

