

Name

Date



7 TIMES TABLE - FROG SHEET 1

Write in the answers to these multiplication facts in the bubbles.

Can you find pairs bubbles with a difference of 21?

$7 \times 4 =$

$3 \times 7 =$

$2 \times 7 =$

$5 \times 7 =$

$7 \times 10 =$

$6 \times 7 =$

$9 \times 7 =$

$7 \times 7 =$

$1 \times 7 =$

$10 \times 7 =$

$7 \times 5 =$

$7 \times 8 =$



Name

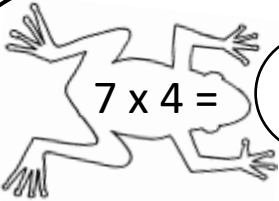
Date



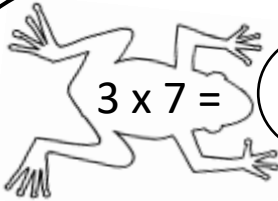
7 TIMES TABLE - FROG SHEET 1 ANSWERS

Write in the answers to these multiplication facts in the bubbles.

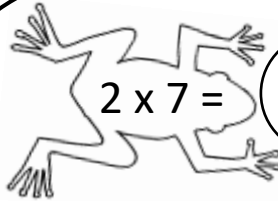
Can you find pairs bubbles with a difference of 21? **70 & 49; 63 & 42; 56 & 35; 49 & 28; 42 & 21; 35 & 14; 28 & 7**



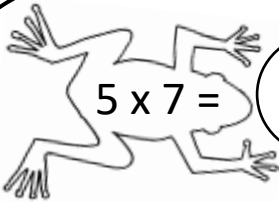
$7 \times 4 =$ **28**



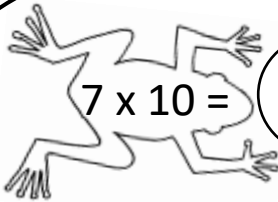
$3 \times 7 =$ **21**



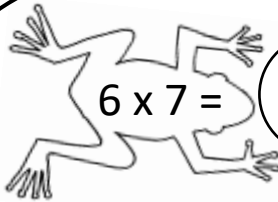
$2 \times 7 =$ **14**



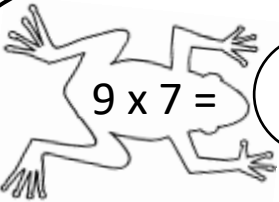
$5 \times 7 =$ **35**



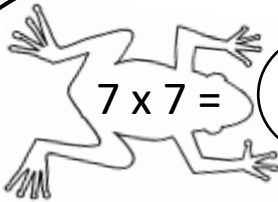
$7 \times 10 =$ **70**



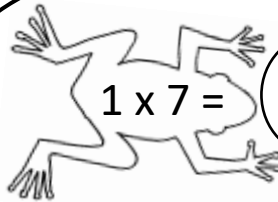
$6 \times 7 =$ **42**



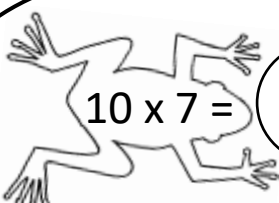
$9 \times 7 =$ **63**



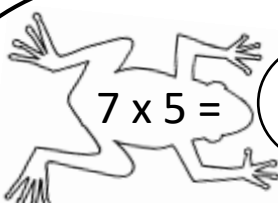
$7 \times 7 =$ **49**



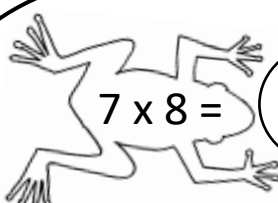
$1 \times 7 =$ **7**



$10 \times 7 =$ **70**



$7 \times 5 =$ **35**



$7 \times 8 =$ **56**