





Name

Date



8 TIMES TABLE - SALAMANDER SHEET 1

Write in the answers to each fact in Sally Salamander's ball.



Newton the Number Newt says "Shade all the even answers yellow.
What do you notice?"



Name

Date



8 TIMES TABLE - SALAMANDER SHEET 1 ANSWERS

Write in the answers to each fact in Sally Salamander's ball.

<p>$8 \times 3 =$ 24</p>	<p>$5 \times 8 =$ 40</p>	<p>$8 \times 4 =$ 32</p>
<p>$8 \times 2 =$ 16</p>	<p>$8 \times 8 =$ 64</p>	<p>$8 \times 6 =$ 48</p>
<p>$8 \times 10 =$ 80</p>	<p>$8 \times 9 =$ 72</p>	<p>$8 \times 7 =$ 56</p>

Newton the Number Newt says "Shade all the even answers yellow.
What do you notice?" **All the answers are even.**

